

Thakur Educational Trust's (Regd)
THAKUR VIDYA MANDIR HIGH SCHOOL & JR.COLLEGE
II TERMINAL RE- EXAMINATION 2017- 2018

Subject: ENGLISH

Name: _____ Std: VI Div: _____

Roll No: _____

Marks: 100 Date: 24/01/2018

Time: 3hrs

Q1 Language Study:

A1 Do as Directed: (8)

- i. Some of the visitors made video clips of the presentation at this stall. (Underline the preposition) (1)
- ii. He realized that he had left his sword behind. (Underline the adverbs and state their type) (1)
- iii. Don't forget to check the spellings. (Rewrite the sentence using 'remember') (1)
- iv. After I hear the news, I hurry to see her.
(Rewrite the sentence using the correct tenses of the underline verbs) (1)
- v. You ____ have heard about Salim Ali.
(fill in the blank with the appropriate auxiliary verb) (1)
- vi. Flying Officer Sekhon displayed great flying skill.
(Frame Wh-question to get the underlined word as the answer) (1)
- vii. Write the meaning of the idiom "within stone's throw". (1)
- viii. Write the noun form of 'Wasting'. And adjective form of 'Courtesy'. (1)

A2 Write the answers of the following: (8)

- i. The trader spoke very ____ (angry).
(Fill in the blanks with appropriate degree of adverb given in the bracket) (1)
- ii. All of us ____ our homework before our parents reach home. (do/does) (1)
- iii. Their wings grew _____. (weaker)
(Fill in the blanks with antonym of the word in the bracket) (1)
- iv. The eruption cause giant waves in the sea. (Rewrite beginning with 'Giant waves..') (1)
- v. Make a meaningful sentence by using the given phrase: here and there (1)
- vi. I have lived twenty years in Delhi. (change into Past Perfect Tense) (1)
- vii. Frame a question which can be answered with 'yes' or 'no'. (1)
- viii. ____ you have a pen (Do/Are) (1)

Q1B Do as directed (4)

1. Write a Sentence beginning with 'Don't'. (1)
2. Where are my brothers-in-laws cars?
(Rewrite the sentence using apostrophe in the correct place) (1)
3. The lawyers prepared their clients for the fight. (change into Future Progressive tense) (1)
4. Complete the table: (1)

Present Tense	Past Tense
Forget	
	Sang

Q2A Read the following passage and do the activities: (10)

- A1 Fill in the blanks with the appropriate words from the extract. (2)
- i) _____ explained the importance of using the scientific method.
 - ii) He was _____ to see the stalls.
 - iii) The stalls showed simple methods of _____.
 - iv) Visitors could try out the various _____ experiments and models.

Mr. Gizare explained the importance of using the scientific method to find the answers to the questions relating to the physical world around us. He was happy to see the stalls, especially the one that showed simple methods of food adulteration. He appreciated the fact that in most of the stalls, visitors could also try out the various science experiments and models. He gave a special pat on the back of the Clean Brigade.

A2 Match the following: (2)

The brigade members	Had come up with the idea of science fair
Preparation for the fair began	56 stalls were allowed in the fair
Considering the area	Spread the message of cleanliness
Mr. Gizare	A couple of month in advance

- A3 i) Find out the word from the passage which means 'to admire'. (1)
- ii) Make a sentence with the word 'adulteration'. (1)
- A4 i) "Visitors could also try out the various science experiments and models"
(Rewrite using 'not only...but also') (1)
- ii) Let us also take a round of the fair to see some of the highlights.
(Underline the prepositions) (1)
- A5. Use your imagination and describe any one stall. (2)

Q2B Read the following passage and do the activities: (10)

B1. Write whether the following statements are True or False: (2)

- i) Shylock demanded a pound of Antonio's flesh.
- ii) The Duke wanted revenge on Antonio.
- iii) Shylock accepted defeat,
- iv) The Duke dislike Antonio

The young lawyer then said that the law allowed Shylock to take a pound of flesh, and he could do that. At the same time, the lawyer warned that while cutting off the flesh, Shylock should not shed even one drop of Antonio's blood. Also, he should cut exactly one pound of flesh – nothing less, nothing more. That would not be allowed by the law. Shylock realized that he could not do what the young lawyer asked him to do, and he accepted his defeat. Antonio's life was saved.

B2 What were the young lawyer's conditions to Shylock? (2)

B3 i) Write the meaning of the word 'pound'. (1)

ii) Add a proper prefix to the word 'allowed' to make a new word. (1)

B4 i) 'Shylock realized that he could not do what the young lawyer asked him to do' (frame Wh-question to get the underlined word as the answer) (1)

ii) Make sentence with the phrase "take advantage of". (1)

B5. Write a few lines about Shylock's character. (2)

3A Read the following and extract do the activities: (5)

A1. Complete the following lines: (2)

- i) He pulls the buttons _____.
- ii) That squeaking door _____.

Tis he who always tears our books,
Who leaves the door ajar,
He pulls the buttons from our shirts,
And scatters pine afar;
That squeaking door will always squeak,
For, prithee, don't you see,
We leave the oiling to be done
By Mr. Nobody

A3. Write the meaning of the word 'prithee' and 'squeaking' (1)

A3. What characteristic of Mr. Nobody do we learn from the poem? (1)

A4. Pick out the rhyming words from the poem. (1)

Q3B Read the following extract carefully and write the Appreciation of the poem with help of the questions given below (10)

Sleep, sleep, my treasure,
The long day's pleasure
Has tired the birds, to their nests they creep;
The garden still is
Alight with lilies,
But all the daisies are fast asleep.

Sleep, sleep, my darling,
Dawn wakes the starling,
The sparrow stirs when he sees day break;
But all the meadow
Is wrapped in shadow,
And you must sleep till the daisies wake!

B1. Write the name of the poem. (1)

B2. Write the name of the poet. (1)

B3. Write the rhyme scheme of the above poem. (1)

B4. Which lines you like the most in the above poem? (1)

B5. Find out the figure of speech of the line "Dawn wakes the starling". (1)

B6. Which is the time of the day you like the most and the one you dislike? (1)

B7. Give the meaning of the line "the garden is still alight with lilies". (2)

B8. Write the implied meaning of the second stanza of the above poem. (2)

Q4A Read the following passage carefully and do the activities: (10)

A1. Fill in the blanks with appropriate words from the extract. (2)

- i) The early riser has done a large amount of _____.
- ii) In the early morning the mind is _____.
- iii) The early riser also finds time to take some exercise in the fresh _____.
- iv) He knows that he has plenty of time to do _____ all the work he can be expected to do.

The great advantage of early rising is the good start it gives us in our day's work. The early riser has done a large amount of hard work before others have got out of bed. In the early morning, the mind is fresh and there are few sounds or other distractions, so that work done at that time is generally done well. In many

-2-

cases, the early riser also finds time to take some exercise in the fresh morning air and his exercise supplies him with a fund of energy that will last until the evening. By beginning so early, he knows that he has plenty of time to do thoroughly all the work he can be expected to do. He goes to sleep several hours before midnight, at the time when sleep is most refreshing and after a night's sound rest rise early next morning in a good health and spirits for the labours of a new day.

- A2i) Why should one take exercise in the morning? (1)
 ii) When is sleep most refreshing? (1)
 A3i) Give words from the passage having the same meaning as- 1) Provides 2) Disturbance (1)
 ii) Write the adjective form of the words: 1) Spirit 2) Health (1)
 A4i) "The early riser has done a large amount of hard work before others have got out of bed."- (Identify the tense of this sentence). (1)
 ii) Frame a sentence in simple future tense. (1)
 A5) What is your personal impression about 'Early rising'? (2)

Q4 B Read the following passage carefully and do the activities: (5)

Trees give shade for the benefit of others and while they themselves stand in the sun and endure the scorching heat, they produce the fruit by which others profit. The character of good men is like that of trees. What is the use of this perishable body, if no use of it is made for the benefit of mankind? Sandal-wood, the more it is rubbed, the more scent does it yield. Sugarcane, the more it is peeled and cut up into pieces, the more juice does it produce. The men who are noble at heart do not lose their qualities even in losing their lives. Those who tread on the right path will not set foot in any other. Those who lay down their lives for the sake of others will assuredly dwell forever in the world of bliss.

- B1 Suggest a suitable title for the above passage. (1)
 B2 What lessons do learn from the passage? (2)
 B3i) The men who are noble at heart do not lose their qualities even in losing their lives. (Rewrite using 'noble hearted') (1)
 ii) Find the word from the passage which means- 1) Very hot 2) Live in (1)

Q5A Letter-Writing (Informal/Formal) (5)

A1 Write a letter to the manager of a hotel to arrange a tea-party for hundred people for your mother's birthday.

OR

A2 Write a letter to your friend, describing your favourite hobby.

Q5B Dialogue Writing / Interview Writing (5)

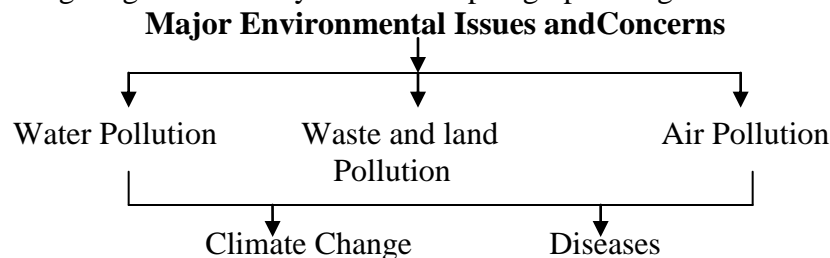
B1. You are going to meet a Great Indian Cricketer very soon. Prepare at least ten questions to interview him.

OR

B2 Write a dialogue between Sheetal, the editor of the class magazine, and Neetu, who has won a prize in a prize drawing competition.

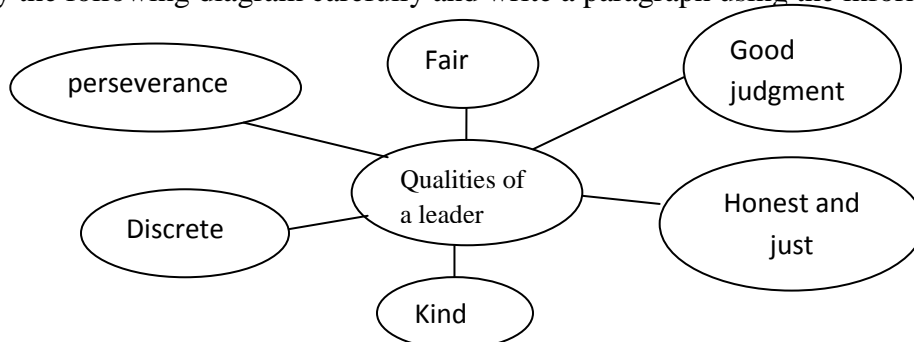
Q6 Information Transfer (5)

A1. Study the following diagram carefully and write a paragraph using the information.



OR

A2 Study the following diagram carefully and write a paragraph using the information.



Q6B Report Writing: (5)
B1 A Blood Donation Camp was organized by your school last week. Write a report of the same for your school magazine.

OR

B2. Write a newspaper report on a road accident you witnessed.

Q7A Write **Any One story** from the following: (5)

- A1 i) All That Glitters Is Not Gold.
ii) As you sow so shall you reap.

OR

A2. Write a short story based on a given outline or clues :
"It was night in the middle of the June. It was terribly hot. There was no electricity. After the day's work, I

Q7B Answer Any one of the following: (5)

B1 Junk Food can be very appealing to children, but they cause more harm to them than they can imagine. Prepare a speech, to be delivered in the school assembly on the harmful effect of Junk Food on the school children.

OR

B2 The role of teachers in everyone's life is great as they are the only visual source of knowledge for their students. Prepare a speech on the Role of Teacher, for your school morning assembly.

*****ALL THE BEST*****

Thakur Educational Trust's (Regd)

THAKUR VIDYA MANDIR HIGH SCHOOL & JR.COLLEGE

I Terminal Exam 2017- 2018

Subject: Geography.

Name: _____ **STD: VI Div: _____ Roll No: _____**

Marks: 40

Date: 14/09/2017

Time: 2hrs.

Q1) A) Tick Mark (✓) the Correct Answer against the correct option:- 4

1 Where do the Prime Meridian and equator intersect each other?

- a) southern ocean b) Atlantic ocean c) African continent

2. What type of climate is observed in Mumbai?

- a) Cold b) Dry c) Humid

3. In which month do we mainly use raincoat?

- a) March b) August c) November

4. In which month do we mainly use cotton clothes?

- a) Summer b) Monsoon c) winter

B) Read the following statement and correct the wrong ones: 4

1. The density of air less is near the surface of the earth.
2. All parallels of latitude converge at the equator.
3. As we move upward from sea level the temperature of the air decreases.
4. Location of road can be described only with the help of map.

Q2) Who am I? 5

1. I keep on changing.
2. I am used to locate the places.
3. I am miniature model of the earth.
4. I am the solid state of water droplets.
5. I am not same at all the places.

Q3) Answer the following questions in one sentence each: 5

- 1) Which meridian is called Greenwich meridian?
- 2) What is called precipitation?
- 3) What is weather?
- 4) With reference to which meridian is the International Date Line marked?
- 5) By how many degrees is earth axis is inclined?

Q4) Answer the following questions in brief. (Any 3) 6

1. Write in brief about the distance between any two consecutive meridians on different parallels.
2. What are the factors influencing the climate?
3. Explain the difference between map and globe?
4. Write in brief about field visit method.

Q5) Give geographical reasons. 4

1. The climate of Mahabaleshwar is cool.
2. Climate near the sea is humid.

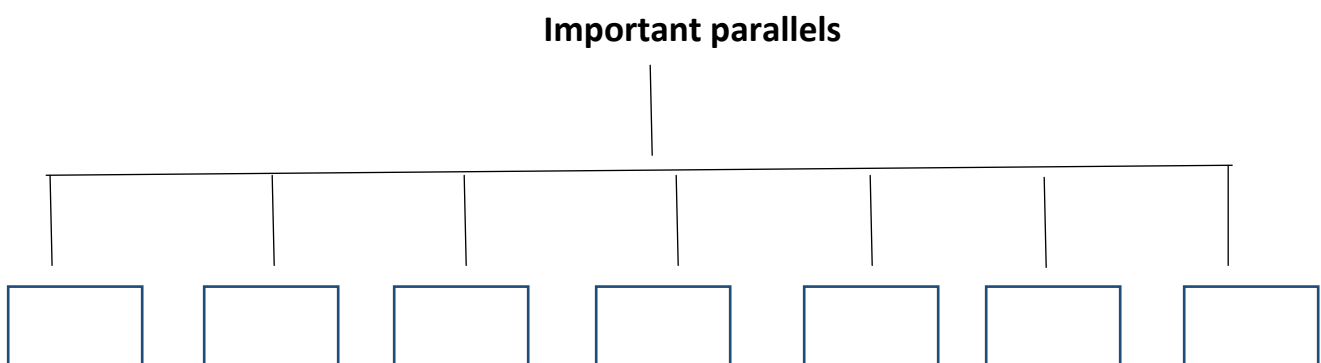
Q6) Answer the following questions (any 2) 4

1. What characteristics of two and three dimensional device did you note?
2. What is the difference between weather and climate?
3. Explain air pressure.

Q7 A) Name the following 4

1. Vapour in atmosphere.
2. Hot and humid places
3. Cold and dry places
4. Higher altitude places

Q7-B) Complete the following table... 4



Name: _____ STD: VI Div: _____ Roll No: _____

Marks: 40

Date: 09/09/2017

Time: 2hrs.

Q1. A. Fill in the blanks: (3)

1. The trade route from China reached _____. (Egypt, Iran, Arabia)
2. It took thousands of years for man to develop the art of _____. (writing, painting, tool-making)
3. The definite and regular pattern followed in nature is called _____. (Sat, Rita, Om)

B. Match the following: (3)

A

1. Spacious bath
2. Asteya
3. Grihapati

B

- a. Dholavira
- b. Mohen-jo-daro
- c. Not stealing
- d. Head of the family

Q2. Answer the following in 25 to 30 words: (Any 2) (4)

1. What does human life depend on ?
2. In the past, what materials were used for writing ?
3. How did the ancient civilization get the name 'Harappa' ?

Q3. Give reasons: (Any 2) (4)

1. Vardhaman Mahavir came to be known as 'Jina'.
2. There is a close relationship between History and Geography.
3. Importance of priests went on increasing.

Q4. Answer the following in 40 to 50 words: (Any 2) (6)

1. What are the teachings of Christianity ?
2. Why were the cows highly priced during the Vedic period ?
3. Write about the town planning in Harappan civilization.

Q5. Answer the following in 60 to 80 words: (Any 2) (8)

1. Write a short note about 'The Great Bath'.
2. Write about the 'Four Noble Truths' or 'Aryasatyas'.
3. State the sources of History of ancient India.

Q6. Fill in the blanks:

(3)

1. _____ helps the development of people's talents. (government, society, occupations)
2. To live among a variety of communities is to experience _____. (laws, secularism, co-existence)
3. Man felt the need for _____ for day to day affairs of the society to run smoothly. (rules, stability, security)

Q7. Answer the following in one sentence: (Any 3)

(3)

1. Which opportunities does our society provide us with ?
2. What is meant by co-operation ?
3. Whose company do we like ?
4. What is necessary for the progress of the individuals and society ?

Q8. State whether the statements are True or False with Reasons: (Any 2) (4)

1. Lack of co-operation hampers our progress.
2. Society is regulated only through traditions.
3. Food, clothing and shelter are our basic needs.

Q9. Answer the following in 25 to 30 words: (Any 1)

(2)

1. What makes life in a society more stable and organised ?
2. What are the advantages of co-operation ?

BEST OF LUCK

Thakur Educational Trust's (Regd)

THAKUR VIDYA MANDIR HIGH SCHOOL & JR.COLLEGE

I Monthly Test 2017- 2018

Subject: Maths.

Name: _____ STD: VI Div: _____ Roll No: _____

Marks: 20

Date: 12/07/2017

Time: 45mins

Q1) Choose the correct answers and rewrite the sentence.

1) How many lines can be drawn from the given single point?

- a) 2 b) 4 c) Countable d) Innumerable

Ans: _____

2) Line segment has how many end points?

- a) 4 b) 1 c) 2 d) 3

Ans: _____

3) What is the measure of a complete angle?

- a) 280° b) 360° c) 180° d) 0°

Ans: _____

4) On the number line, the numbers on the left of zero are called which numbers?

- a) Negative numbers b) positive numbers c) Whole numbers d) Natural numbers

Ans: _____

5) Square of any negative number is _____.

- a) Negative b) positive c) Zero d) None of these

Ans: _____

6) The two rays of an angle are called _____ of the angle.

- a) Line b) two arms c) two parts d) None of these

Ans: _____

7) Set of the points extending infinitely in all directions on the same flat surface is _____.

- a) Lines b) Line segment c) Plane d) Point

Ans: _____

8) Three or more points are _____ if they lie on a line.

- a) Non-Collinear b) Collinear c) Intersecting d) None of these

Ans: _____

9) Three or more lines when pass through a common point are called _____ lines.

- a) Parallel b) Concurrent c) Collinear d) All of these

Ans: _____

10) In how many maximum number of points can two distinct lines intersect.

- a) 3 b) infinite c) 0 d) 1

Ans: _____

11) What type of surface is needed for making Rangoli?

- a) Plane b) irregular c) curved d) All of these

Ans: _____

12) What is the opposite of the number -84?

- a) 84 b) -84 c) 48 d) -48

Ans: _____

13) The number of the line segments possible with three collinear points is _____.

- a) 1 b) 2 c) 3 d) infinite

Ans: _____

14) A pair of lines which do not intersect at any point are called _____ lines.

- a) Perpendicular b) Parallel c) Concurrent d) intersecting

Ans: _____

15) Two points in a plane determine _____.

- a) An infinite number of segments b) Two segments c) Exactly one line segment d) None of these

Ans: _____

16) Which of the following is an obtuse angle?

- a) 92° b) 195° c) 181° d) 83°

Ans: _____

17) John turns right angle three times. How many degrees does he turn through?

- a) 90° b) 330° c) 180° d) 270°

Ans: _____

18) The value of $-2+(+5)$ is _____

- a) 3 b) -2 c) -3 d) 2

Ans: _____

19) Use the proper sign to write the temperature of Shimla which is 7° below 0°

- a) 7°C b) 0° c) -7°C d) None of these

Ans: _____

20) Put proper sign in the box -6

- a) $>$ b) $=$ c) $<$ d) None of these

Ans: _____

THAKUR VIDYA MANDIR HIGH SCHOOL & JR.COLLEGE

II Monthly Test 2017- 2018

Subject: Maths.

Name: _____ STD: VI Div: _____ Roll No: _____

Marks: 30

Date:18/08/2017

Time: 45mins

Q1) Choose the correct answers and rewrite the sentence.

1) If $427 \times 45 = 19215$ then $4.27 \times 4.5 =$ _____

- a)192.15 b)19.215 c)1921.5 d)1.9215

Ans : _____

2) What is $\frac{3}{4}$ in decimal form.

- a) 75 b) 0.75 c) 0.57 d) none of these

Ans: _____

3) The measure of an acute angle is _____ than 90°

- a) equal b) more c) less d) none of these

Ans: _____

4) The angle whose measure is 205° is called _____ angle .

- a) obtuse b) acute c) reflex d) straight

Ans: _____

5) _____ is used to measure an angle.

- a) scale b) palm c) protractor d) set square

Ans: _____

6) Negative integers are always _____ than zero .

- a) greater b) smaller c) twice d) thrice

Ans: _____

7) _____ number does not have a positive or negative sign.

- a) one b) three c) zero d) four

Ans: _____

8) Angle XYZ is denoted as _____.

- a) xyz b) xzy c) x d) z

Ans : _____

9) The unit to measure an angle is _____.

- a) kilogram b) degree c) celsius d) gram

Ans : _____

10) The opposite walls of a room gives us an idea of _____ .

- a) parallel lines b) perpendicular lines c) both of them d) none of these

Ans: _____

11) Sun is an example of a _____ .

- a) ray b) line segment c) line d) both b and c

Ans: _____

12) Write the place value of the underlined digit in the number 85.63

- a)0.3 b)0.30 c)0.03 d)0.003

Ans: _____

13) $8\frac{4}{10}$ in decimal fraction form is written as _____ .

- a) 8.04 b)8.4 c)8.004 d)0.84

Ans: _____

14) _____ is a mixed fraction.

- a) $\frac{9}{19}$ b) $3\frac{1}{2}$ c) $\frac{15}{20}$ d) 8

Ans: _____

15) _____ is an improper fraction.

- a) $\frac{9}{4}$ b) $\frac{3}{4}$ c) $\frac{1}{4}$ d) $\frac{1}{5}$

Ans: _____

16) _____ is a proper fraction.

- a) $\frac{1}{2}$ b) $\frac{9}{2}$ c) $\frac{16}{10}$ d) $\frac{7}{5}$

Ans: _____

17) $2\frac{3}{5} =$ _____

- a) $\frac{5}{13}$ b) $\frac{13}{5}$ c) $\frac{5}{3}$ d) $\frac{13}{2}$

Ans: _____

18) The decimal form of $5\frac{3}{8}$ is _____

- a) 5.375 b) 5.000 c)5.255 d)2.325

Ans: _____

19) Multiplicative inverse of -2 is _____ .

- a) -2 b) +2 c) $-\frac{1}{2}$ d) $\frac{2}{1}$

Ans: _____

20) The reciprocal of the smallest prime number is _____ .

- a)0 b) $\frac{1}{2}$ c) 1 d) 2

Ans: _____

21) 3 hundredths can be written as _____ .

- a)0.003 b) 0.03 c) 0.300 d)300

Ans : _____

22) compare 12.1280 _____ 12.129 .

- a) > b) < c) = d) can not be determined

Ans: _____.

23) The sum of two numbers is 31.021. If one of them is 11.56, then the other number is _____ .

- a) 19.461 b) 17.461 c) 18.641 d) 19.561

Ans: _____

24) The cost of 1 litre of milk is RS.7.50, then the cost of 30.5 litres of milk will be?

- a) RS.225.75 b) Rs.223.75 c) RS.228.75 d) RS.227.89

Ans: _____

25) Tarun had $5\frac{1}{4}$ Kg of Sugar. He used $2\frac{1}{2}$ Kg to bake some cakes . How much Sugar did he have left?

- a) $\frac{3}{4}$ Kg b) $1\frac{5}{4}$ Kg c) $2\frac{3}{4}$ Kg d) $\frac{1}{2}$ Kg

Ans: _____

26) Sid travelled 5km52m by bus, 2km265m by car and 1km30m he walked. Total distance travelled by him is _____ .

- a) 8.347km b) 8.000km c) 8.925km d) 9.000km

Ans : _____

27) A reflex angle is _____ a straight angle .

- a) smaller than b) larger than c) equal to d) one half of

Ans: _____

28) $2 + \frac{1}{100} + \frac{3}{1000} =$ _____ .

- a) 0.213 b) 2.13 c) 2.013 d) 2.130

Ans: _____

29) A set of points which is a part of a line with two end points is _____ .

- a) line b) line segment c) ray d) point

Ans: _____

30) A pair of lines which intersect at a point are called _____ lines.

- a) perpendicular b) parallel c) concurrent d) intersecting

Ans: _____

ALL THE BEST