

*Thakur Educational Trust's (Regd)*  
 THAKUR VIDYA MANDIR HIGH SCHOOL & JR.COLLEGE  
 III TERMINAL EXAMINATION 2017- 2018

Subject: ENGLISH

Name: \_\_\_\_\_ Std: VI Div: \_\_\_\_\_

Roll No: \_\_\_\_

Marks: 100 Date: 03/04/2018

Time: 3hrs

**Q1A Language Study: A1 :Do as Directed: (8)**


- i. Some of the visitors made video clips of the presentation at this stall. (Underline the preposition) (1)
- ii. He realized that he had left his sword behind. (Underline the adverbs and state their type) (1)
- iii. Don't forget to check the spellings. (Rewrite the sentence using 'remember') (1)
- iv. After I hear the news, I hurry to see her. (1)  
 (Rewrite the sentence using the correct tenses of the underline verbs)
- v. You \_\_\_\_ have heard about Salim Ali. (1)  
 (fill in the blank with the appropriate auxiliary verb)
- vi. Flying Officer Sekhon displayed great flying skill. (1)  
 (Frame Wh-question to get the underlined word as the answer)
- vii. Write the meaning of the idiom "within stone's throw". (1)
- viii. Write the noun form of 'Wasting'. And adjective form of 'Courtesy'. (1)

**A2 Do as directed: (8)**

- i. The trader spoke very \_\_\_\_ (angry). (1)  
 (fill in the blanks with appropriate degree of adverb given in the bracket)
- ii. "It didn't chomp or chew or chase..." (pick out and explain the example of alliteration) (1)
- iii. Their wings grew \_\_\_\_\_. (weaker) (1)  
 (fill in the blanks with antonym of the word in the bracket)
- iv. The battle has been won but the war isn't over yet (rewrite beginning with 'Although') (1)
- v. Travelling to Mizoram is a little difficult. (change into interrogative sentence) (1)
- vi. I have lived twenty years in Delhi. (change into Past Perfect Tense) (1)
- vii. His nephew decided to become a monk. (rewrite using opposite gender of the underline words) (1)
- viii. The novel is \_\_ fantasy but it has an important message for children all over \_\_ world. (fill in the blanks with 'a', 'an', or 'the') (1)

**Q1B Do as directed: (4)**

1. Don't forget to visit the Ahom palaces. (change into assertive sentences) (1)
2. Where are my brothers-in-laws cars? (1)  
 (Rewrite the sentence using apostrophe in the correct place)
3. The lady refused to look after the goose and the calf. (rewrite using the plural forms of the underline nouns) (1)
4. Complete the following word web: (1)



**Q2A Read the following passage and do the activities: (10)**

A1 Complete the following sentences: (2)

- i) When it starts raining \_\_\_\_\_ .
- ii) \_\_\_\_\_ are enemies of my egg and chick.

When it starts raining, we all gather at our favourite grasslands where there are no people to disturb us. I perform a wonderful dance by gulping air in the special feathery pouch attached below my neck. This pouch helps me to produce a resonating sound similar to the one reduced by the cow- 'Hooooom'. I dance in joy with puffed out feathers and cocked up tail and dropped down wings. It helps me to impress my soul mate. You know that we birds lay eggs and our young ones hatch out of eggs. Mother GIB lays just one egg directly on the ground. We don't believe in building nests – but we have a special trick to protect our eggs from predators. The egg looks like a stone. Monitor lizards, foxes, dogs, pigs, snakes and eagles are enemies of my egg and chick, but my wife protects the egg from all of them. By the time the young one hatches out of the egg, rains arrive. There's plenty of grass, swarming with insects – fresh food for my family. Young ones of other birds soon fly away from the nest, but a Great Indian Bustard mother and chick stay together for nearly one year. The chick learns many good habits from the mother.

A2. Who said the following: (2)

- i) I am the heaviest flying bird of India. (Great Indian Bustard/Some other bird)
- ii) I live in mountainous regions. (Great Indian Bustard/Some other bird)
- iii) We don't believe in building nests. (Great Indian Bustard/Some other bird)
- iv) I don't like grasshopper or beetles. (Great Indian Bustard/Some other bird)

A3. Match the following: (2)

<b>A</b>	<b>B</b>
----------	----------

Puffed out	Arousing admiration
Cocked up	A sort of bag
pouch	Made bigger and rounder
impressive	Raised

A4. Identify the **Verb** or **Adjective** from the list given in the box below: (2)

eat	healthy	wonderful	helps
-----	---------	-----------	-------

A5. How can you encourage birds to visit your surroundings? (2)

**Q2B Read the following passage and do the activities:** (10)

B1. Write whether the following statements are True or False: (2)

- Milo was sure that this new game would turn out to be interesting.
- Though Milo didn't know it then, he had begun his journey in the land of expectations.
- He found himself speeding down a highway into a fairy land.
- He had to rescue the princesses Rhyme and Reason from the diamond castle.

Milo was not sure that this new game would turn out to be interesting. However, he sat in his toy car, approached the booth, paid the toll with the coins, and drove past the toll booth. When he looked back, oh wonder of wonders, the toll booth has disappeared along with Milo's room and even his house! He found himself speeding down a highway into an unknown territory! What happened next in the story of Norman Juster's novel, 'The Phantom Toll Booth'? Though Milo didn't know it then, he had begun his journey in the land of expectations. He was in the Kingdom of wisdom. He had many adventures there. He had to rescue the princesses Rhyme and Reason from the castles of air. Was he successful in the mission? Who were the strange people and creatures he met there? What happen to the Toll booth? Did Milo see it again? Did Milo find his life interesting later on? You must read the Novel to find it out.

B2. Fill in the blanks with the appropriate words from the extract: (2)

- The toll booth has \_\_\_\_\_ along with Milo's room.
- He had begun his journey in the land of \_\_\_\_\_.
- He was in the Kingdom of \_\_\_\_\_.
- Who were the strange people and \_\_\_\_\_ he met there?

B3. Find the correct meaning of the following words form the bracket: (2)

- wisdom (intelligence/foolishness)
- expectation (assumption/disbelieve)
- disappear (consolidate/vanish)
- approach (depart/come near)

B4. Frame Wh-question to get the underlined word as the answer (2)

- He had to rescue the princesses Rhyme and Reason from the castles of air.
- He sat in his toy car and approached the booth.

B5. What do you think, who were the strange people and creatures Milo met there? (2)

**Q3A Read the following and extract do the activities:** (5)

A1. Complete the following lines: (2)

- The wind tells the little leaves to \_\_\_\_\_.
- As soon as the leaves hear the wind's call \_\_\_\_\_.

"Come, little leaves,"  
Said the wind one day,  
"Come over the meadow  
With me, and play;  
Put on your dresses  
Of red and gold;  
Summer is gone,  
And the days grow cold."

Soon as the leaves  
Heard the wind's loud call,  
Down they came fluttering,  
One and all;  
Over the meadow and flew,  
Singing the soft  
Little songs they knew.

A2. i) What are the two seasons described in the poem? (1)

- winter and summer
- autumn and winter
- spring and summer

ii) Pick out the rhyming words from the above poem. (1)

A3. Find out one figure of speech from second stanza and explain the same. (1)

**Q3B Write an appreciation of the poem The Silver House on the basis of the following points:** (10)

\* Title \*Poet \*Rhyme Scheme \*Favourite line/lines \*Figure of Speech \*Theme \*Why do you like the poem

**Q4A Read the following passage carefully and do the activities:** (10)

A1. Find out the correct words from the passage for the underline words: (2)

- People moan about truth as a great evil.

- ii) I sympathize with the honest man's boy.
- iii) As a rule there is more genuine disappointment in life.
- iv) Immortals who were not born to enjoy.

People moan about poverty as a great evil and it seems to be an accepted belief that if people had plenty of money, they would be happy, and get more out of life. As a rule there is more genuine satisfaction in life and more is obtained from life in the humble cottage of the poor man than in the palace of rich men, who are attended by servants and governesses at a later stage. At the same time I am glad to think they do not know what they have missed. It is because I know how sweet and happy and pure the home of honest poverty is, how free from perplexing care and social envies and jealousies, how loving and united the members are in the common interest of supporting the family, that I sympathize with the rich man's boy and congratulate the poor man's son. It is for these reasons that from the ranks of the poor so many strong eminent self-reliant men have always sprung. If you read the list of the "Immortals who were not born to die" you will find that most of them have been poor.

- A2. Complete the following sentences: (2)
- i) Rich men are attended by \_\_\_\_\_.
  - ii) The popular notion about poverty is \_\_\_\_\_.

- A3. Find words from the passage with similar meanings to: (2)
- i) Self - dependent    ii) Cry    iii) Living forever    iv) Authentic

- A4. Complete the following table: (2)

Present	Past	Past Participle
		sprung
read		

- A5. What is your personal impression about 'self-reliant man'? (2)

**Q4 B Read the following passage carefully and write a précis/summary writing: (Write a title, central idea and use appropriate language) (5)**

A nation-wide afforestation program on a war footing is the need of the hour. It is our duty to ensure that our forests are managed in such a way that we do not cut more than what can grow back naturally or artificially. To meet rural needs of firewood and small timber, a social forestry program will have to be launched. It will be useful to create community forests for groups of villages all over the country on village common lands. As much as 14 per cent of the country's total land area is officially classified as uncultivated 'waste land'. It is possible to make these waste lands green. Afforestation will not only meet the enormous rural demand for firewood and small timber, but will also provide employment to thousands of people.

**Q5A Letter-Writing (Informal/Formal) (5)**

- A1 You went to your native place to attend a family function. Write a letter to the principal requesting her to let you appear for the terminal re-exam which you had skipped.

**OR**

- A2 Write a letter to your cousin brother advising him to work harder for exams.

**Q5B Dialogue Writing / Interview Writing (5)**

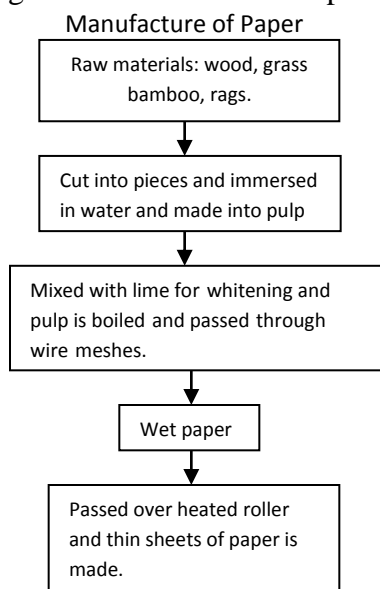
- B1. Frame ten interview questions you would like to ask to the topper of your class at the recently held Term-II examinations.

**OR**

- B2. Mira wants to go to the 'Water Kingdom' with her friends. She asks her mother for permission. Construct a dialogue between both of them.

**Q6A Information Transfer (5)**

- A1. (Non-verbal to Verbal): Transfer the given information into a paragraph.



OR

A2. Write the Dos and Don'ts of cholesterol control, based on the following passage:

Cholesterol in blood can be controlled by a regulated diet. Doctors advise us to avoid high cholesterol food and consume foods like fruits, vegetables, cereals, whole grain and pulses. If one avoids bad habits such as smoking and drinking, one can maintain desirable cholesterol levels. Also it is very necessary to exercise regularly and to avoid over eating and eating food items that contain too much fat or oil in order to maintain good cholesterol levels in the body.

DO's	DON'Ts

**Q6B Report Writing:**

(5)

B1 There was a workshop organized by your school on puppet making. Prepare a report for your school magazine on the same.

OR

B2. You are a reporter of a national daily. You were asked to cover an inauguration of an exhibition on a vital social issue. Mentioning all relevant details write a report.

Q7A Expand any one of the given two ideas:

(5)

- i) Work is worship
- ii) Charity begins at home

**Q7B Answer any one of the following:**

(5)

B1. You have been selected to deliver a speech during the school assembly on Conservation of Water. Write the speech.

OR

B2. Develop a story, with the following ending. Also give a suitable title:

.....the two friends realized their mistake and decided to become good friends once again.

\*\*\*\*\*ALL THE BEST\*\*\*\*\*

*Thakur Educational Trust's (Regd)*

THAKUR VIDYA MANDIR HIGH SCHOOL & JR.COLLEGE

III Terminal Exam 2017- 2018

Subject: Geography

Name: \_\_\_\_\_ Std : VI Div: \_\_\_\_\_

Roll No: \_\_\_\_\_

Marks: 40 Date: 09/04/2018

Time: 2hrs.

**Q1.) Fill in the blanks:**

(4)

1. How many places on the earth may be located on 45 N parallel? \_\_\_\_\_(One, two, many)
2. Where do prime meridian and equator intersect each other? \_\_\_\_\_(Southern ocean, Atlantic Ocean, African continent)
3. In which month do we mainly use raincoat? \_\_\_\_\_(March, August, November)
4. Which of these animals employed for ploughing? \_\_\_\_\_ (Camel, Asses, Oxen)

**Q2) Read the following statements and correct the wrong ones:**

(4)

1. Isotherms generally appear parallel to the longitudes. \_\_\_\_\_
2. The density of air is less near the surface of the earth. \_\_\_\_\_
3. While describing the location of a place mentioning the meridian is sufficient. \_\_\_\_\_
4. Parallels and meridians are imaginary lines. \_\_\_\_\_

**Q3) Name the following:**

(4)

1. Primary occupations. \_\_\_\_\_

2. Animals employed for transportation. \_\_\_\_\_
3. The main three types of rocks. \_\_\_\_\_
4. Countries that have gained importance in water transport. \_\_\_\_\_

**Q4) Answer in one sentence: (4)**

1. Where is the high quality coal used on a large scale?
2. In which region can this sun's rays be perpendicular on two days in a year?
3. Which device will be suitable for understanding the concept of day and night?
4. Which occupations are called quaternary occupation?

**Q5) Give geographical reasons (any 2). (4)**

1. Basalt rocks used for building the forts in Maharashtra.
2. The type of occupation determines a person's income.
3. We need to use environment-friendly energy resources.

**Q6) Answer in short (any 3) (6)**

1. What effects do nearness to the sea and height above mean sea level have on climate?
2. Will it be alright if water or oil used in thermometer?
3. What are the purposes for which land is used?
4. What factors influence the formation of soil?

**Q7) Answer in brief (any 3) (6)**

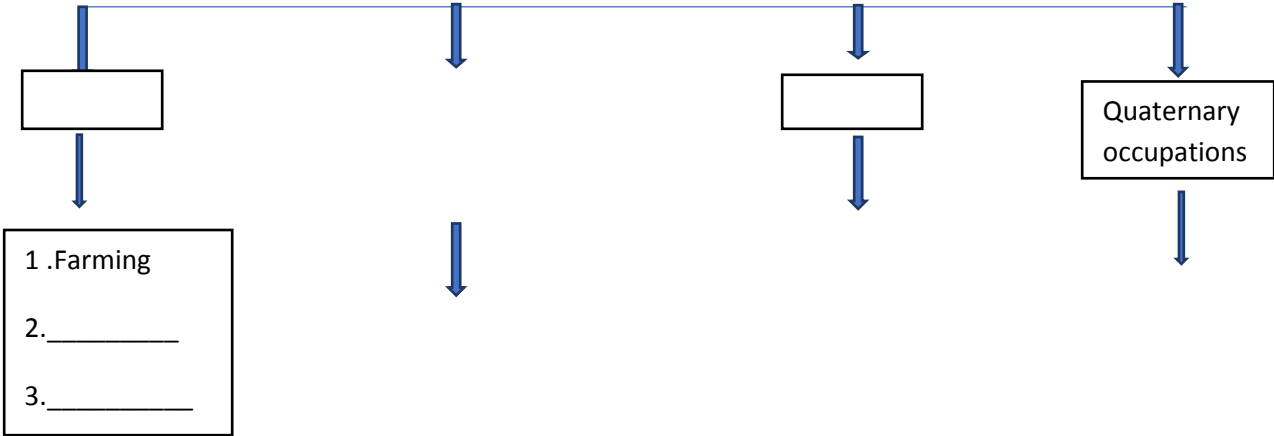
1. What are the factors influencing the climate?
2. What are the causes of pollution of oceanic water?
3. Write in brief about the formation process of sedimentary rocks?
4. What are the main features of metamorphosed rocks?

**Q8.) Find the difference between (any 2) (4)**

1. Igneous rocks and Sedimentary rocks.
2. Mineral oil and solar energy.
3. Metamorphic rocks and igneous rocks.

**Q9.) Complete the following table: (4)**

Human Occupations



Secondary occupations

**ALL THE BEST!**

1. \_\_\_\_\_  
2. \_\_\_\_\_

1. Transport  
2. \_\_\_\_\_  
3. \_\_\_\_\_

1. Medical service  
2. \_\_\_\_\_  
3. \_\_\_\_\_

Name: \_\_\_\_\_ STD:VI Div: \_\_\_\_\_ Roll No: \_\_\_\_\_

Marks: 60

Date: 02/04 /2018

Time: 2 hrs.

**HISTORY**

**Q1.A. Fill in the blanks.**

**(4)**

1. Nandivardhan and Vatsagulm are the branches of \_\_\_\_\_ dynasty. (Satavahana, Vakataka, Chalukya)
2. The \_\_\_\_\_ is the holy place of worship for Christians. (Mosque, Church, Temple)
3. Folk tales are a part of \_\_\_\_\_ sources of History. (Oral, written, material)
4. \_\_\_\_\_ embraced Buddhism. (Bimbisara, Ajatshatru, Pradyot)

**Q1.B. Identify the wrong pair and correct it.**

**(4)**

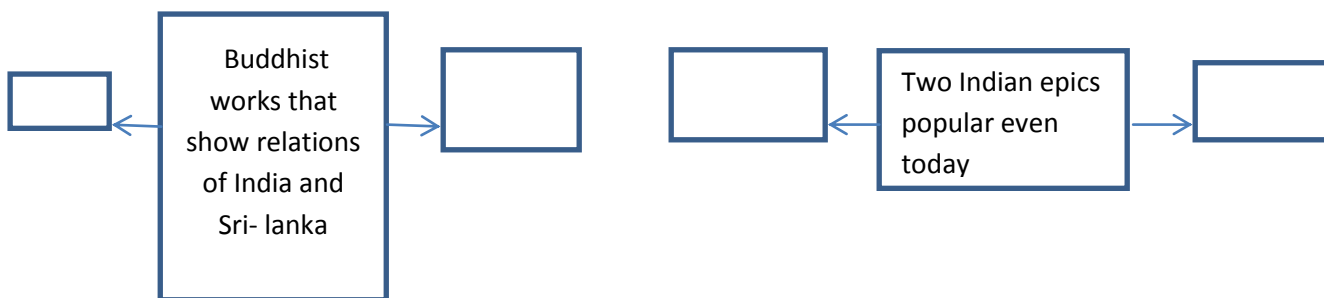
1. Alexander- Emperor of Greece
2. Megasthenes- Ambassador of Seleucus Nicator
3. Ashoka- Emperor of Rome

**Q2.A. Complete the following. (Any 2)**

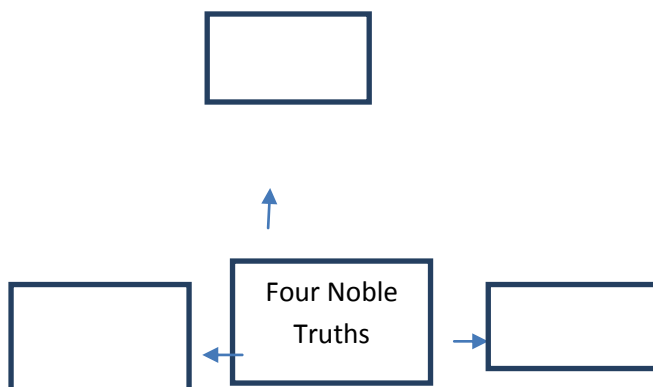
**(4)**

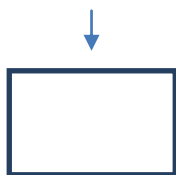
1)

2)



3)





**Q2.B. Short note. (Any 2)** (4)

1. Explain Therigatha.
2. Stupa at Sanchi.
3. Themes discussed in Ayurveda.
4. Characteristics of the Greek style of coins.

**Q3.A. Give reasons. (Any 3)** (6)

1. Alexander had to turn back.
2. There was a fight among the satraps.
3. The spread of Buddhism became easier in China.
4. The fame of Nalanda had spread far and wide.

**Q3.B. Answer in 25-30 words. (Any 2)** (4)

1. Name the place in Afghanistan where stupa in Gandhara style was erected.
2. Which goods were exported in Muziris port ?
3. When did Kushanas establish their kingdom in India ?

**Q4. Read the passage and answer the questions.** (4)

Kanishka's gold coin was minted by Emperor Kanishka. It has the words 'Shao Nano Shao Kaneshki Koshano' on one side. It means 'king of kings, Emperor Kanishka Kushana'. On the other side there is an image of Gautama Buddha and the word 'Boddo' meaning Buddha, written in Greek script.

1. Which words does the gold coin have on one side ?
2. What is the meaning of these words ?
3. What is there on the other side of the coin ?
4. By whom was the gold coin minted ?

**Q5. Answer in detail. (Any 2)** (10)

1. Write about Sangham Literature ?
2. Write about the Silk route ?
3. Means of entertainment and sports during Maurya period ?

#### **CIVICS**

**Q6. Fill in the blanks choosing the correct option.** (4)

1. The district collector is appointed by the \_\_\_\_\_. (Prime Minister, President, State Government)
2. \_\_\_\_\_ is regarded as the first citizen of the city. (Prime Minister, President, Mayor)
3. The term of Zilla Parishad is \_\_\_\_\_ years. (3, 4, 5)
4. India is an important \_\_\_\_\_ nation. (small, secular, under-developed)

**Q7. State whether True or False with reasons. (Any 2)** (4)

1. The first city in Maharashtra to have a Municipal Corporation is Nagpur.
2. Society is regulated only through traditions.
3. BDO is appointed by Panchayat Samiti.

**Q8.A. Short Notes. (Any 2)** (4)

1. Benefit of reservation of seats in the local government.
2. Sarpanch.
3. Any 4 opportunities available in cities.
4. Where does the Nagar Panchayat function ?

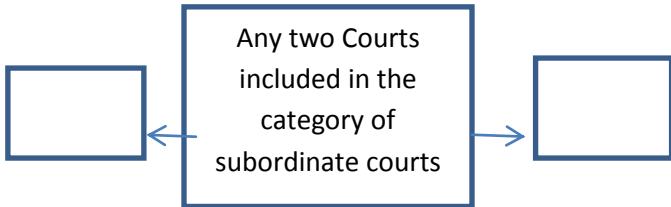
**Q8.B. Complete the following. (Any 2)** (4)

1. \_\_\_\_\_
2. \_\_\_\_\_





3.



**Q9. Write your opinion. (Any 2)**

**(4)**

1. What will you do if garbage is collected near your locality ?
2. What will you do if road near your locality is flooded with water because of water pipeline burst ?
3. What will you do if you see someone cutting trees in your locality ?

**BEST OF LUCK**

*Thakur Educational Trust's (Regd)*

THAKUR VIDYA MANDIR HIGH SCHOOL & JR.COLLEGE

III TERMINAL EXAM 2017- 2018

Subject: Science.

Name: \_\_\_\_\_ STD: VI Div: \_\_\_\_\_ Roll No: \_\_\_\_\_

Marks: 80  
mins.

Date: 04/04/2018

Time: 2hr 45

**SECTION I**

**Q1 A) Complete the following activity**

**a) Fill in the blanks**

**(3)**

- 1) The force of friction always acts \_\_\_\_\_ the motion.
- 2) The kite looking for its prey flies with \_\_\_\_\_ motion in the sky.
- 3) When the force is applied on an object it shows \_\_\_\_\_.

**b) State true or false. If it is false rewrite correct sentence.**

**(2)**

- 1) Fossil fuels are formed from dead remains of animals and plants.
- 2) The ability to respond to an event is called excretion.

**Q1 (B) Multiple choice question. Choose the correct option and rewrite sentence .**

**(5)**

- 1) \_\_\_ is a harmful plant..  
a) Dodder                      b) Shatavari                      c) Vasaka                      d) Oxen.
- 2) Stretched bow is an example of \_\_\_ energy.  
a) kinetic                      b) potential                      c) heat                      d) light
- 3) Merry-go-round is an example of \_\_\_\_\_ motion .  
a) periodic                      b) circular                      c) random                      d) oscillatory
- 4) \_\_\_\_\_ is used to cure nausea.  
a) mango                      b) apple                      c) coconut                      d) ginger
- 5) \_\_\_\_\_ is celebrated as ozone protection day .  
a) 16<sup>th</sup> October                      b) 16<sup>th</sup> December                      c) 16<sup>th</sup> November                      d) 16<sup>th</sup> January.

**Q2) Answer the following questions ( any five )**

**(10)**

- 1) Define circular motion .
- 2) What is potential energy. Give examples .
- 3) What do you mean by fossil fuels.
- 4) Give remedial measures of Dog bite .
- 5) How sound is heard ?.
- 6) Which tasks can be done by using a Lever ?
- 7) What is a Shadow ?

**Q3 Answer the following questions (any five )**

**(15)**

- 1) Write a note on Newton disc .
- 2) How to find north pole of a magnet ?
- 3) How is an electromagnet made ?
- 4) Draw a Ray diagram of pin hole camera .
- 5) Why machines have to be maintained ?
- 6) Give three effects of Earthquake .
- 7) What are simple machines ? Explain pulley .

**Q4 Attempt any one of the following**

**(5)**

- 1) Define propagation of Light . Explain nature of image in plane mirror .
- 2) What are electromagnets ? How a maglev train works ?

**SECTION II**

**Q5 A) Complete the following activity .**

**a) Fill in the blanks**

**(3)**

- 1) \_\_\_\_\_ is a flowering plant.
- 2) Ability to return to its original shape is called \_\_\_\_\_.
- 3) The property of a substance to get dissolved is called \_\_\_\_\_ ..

**b) Find the odd one out;**

**(2)**

- 1) Guava , Radish , Carrot , Beetroot .
- 2) Sunflower , banyan , jowar , bajra .

**Q5B) Multiple choice questions. Choose the correct option and rewrite sentence.**

**(5)**

- 1) Amphibians can live on land and \_\_\_\_\_.  
 a) Air                      b) Water                      c) Climate                      d) Soil
- 2) Climbers have \_\_\_ roots.  
 a) Fibrous                      b) Adventitious                      c) Aerial                      d) None
- 3) \_\_\_\_\_ is invertebrate animal .  
 a) Fish                      b) Bird                      c) Man                      d) Earthworm
- 4) \_\_\_\_\_ has a definite shape of its own .  
 a) Liquid                      b) Solid                      c) Gas                      d) None
- 5) The property of metals to be converted into sheets is called \_\_\_\_\_.  
 a) Sonority                      b) Ductility                      c) Malleability                      d) Conductivity

**Q6 Answer the following questions (any five)**

**(10)**

- 1) Define sublimation with an example..
- 2) Define thermal conductivity with an example ..
- 3) What are functions of root ?
- 4) How are pearls obtained ?
- 5) Explain malnutrition .
- 6) What are probiotics ? In what form do we take in our diet ?
- 7) What is a fibre ? How to classify them ?

**Q (7) Answer the following questions .(Any five )**

**(15)**

- 1) What are special features of Mars ?
- 2) The luminance and shape of Polaris does not remain stable Give reason ..
- 3) What are comets .Why they look like feathery tail?
- 4) Write a note on Rib cage .
- 5) What will happen if melanin pigment in our skin is absent ?
- 6) Distinguish between axial skeleton and appendicular skeleton .
- 7) How is terylene prepared ?

**Q8 Attempt the following (any one)**

**(5)**

- 1) What are Vitamins . Classify them with examples in detail.
- c) Write note on a) Structure of human skin b) Functions of skin.

## ALL THE BEST

**Thakur Educational Trust's (Regd)**  
**THAKUR VIDYA MANDIR HIGH SCHOOL & JR.COLLEGE**  
 III Terminal Re- Exam 2017- 2018  
 Subject: Geography

Name: \_\_\_\_\_ Std: VI Div: \_\_\_\_\_

Roll No: \_\_\_\_\_

Marks: 40

Date: 18 /04/2018

Time: 2hrs.

**Q1.) Fill in the blanks:**

**(4)**

1. How much is the area of Vatican city? \_\_\_\_\_ (0.44 sq.km, 44 sq.km, 440 sq.km)
2. Which parallel bisect the earth? \_\_\_\_\_ (Tropic of cancer, Equator, Tropic of capricorn)
3. What type of climate is observed in Mumbai? \_\_\_\_\_ (Cold,Dry,Humid)
4. Which of these animals employed for transportation? \_\_\_\_\_ (Horses, Asses, Oxen)

**Q2) Read the following statements and correct the wrong ones: (4)**

1. The water heats up and cool down slowly. \_\_\_\_\_
2. The density of air is more near the surface of the earth. \_\_\_\_\_
3. Location of a road cab be described by only with the map. \_\_\_\_\_
4. All parallels of latitude converge at the equator. \_\_\_\_\_

**Q3) Name the following: (4)**

1. Secondary occupations. \_\_\_\_\_
2. Animals employed for ploughing. \_\_\_\_\_
3. A rock formed out of volcanic froth. \_\_\_\_\_
4. Natural resource. \_\_\_\_\_

**Q4) Answer in one sentence: (4)**

1. Why the mineral oil is called black gold?
2. What is a globe?
3. Which meridian is called Greenwich meridian?
4. Which occupations are called primary occupation?

**Q5) Give geographical reasons (any 2). (4)**

1. There is a difference in the climate of regions close to the oceans and far away from the oceans.
2. Quaternary services are not commonly seen.
3. It is necessary to conserve our natural resources.

**Q6) Answer in short (any 3) (6)**

1. What is isotherm??
2. Write in short about thermometer?
3. What are the purposes for which land is used?
4. write the uses of minerals.

**Q7) Answer in brief (any 3)**

**( 6 )**

1. What is called precipitation?
2. Why it is economic to carry out transport by waterways?
3. Write in brief about the formation process of metamorphic rocks?
4. What are the main features of igneous rocks?

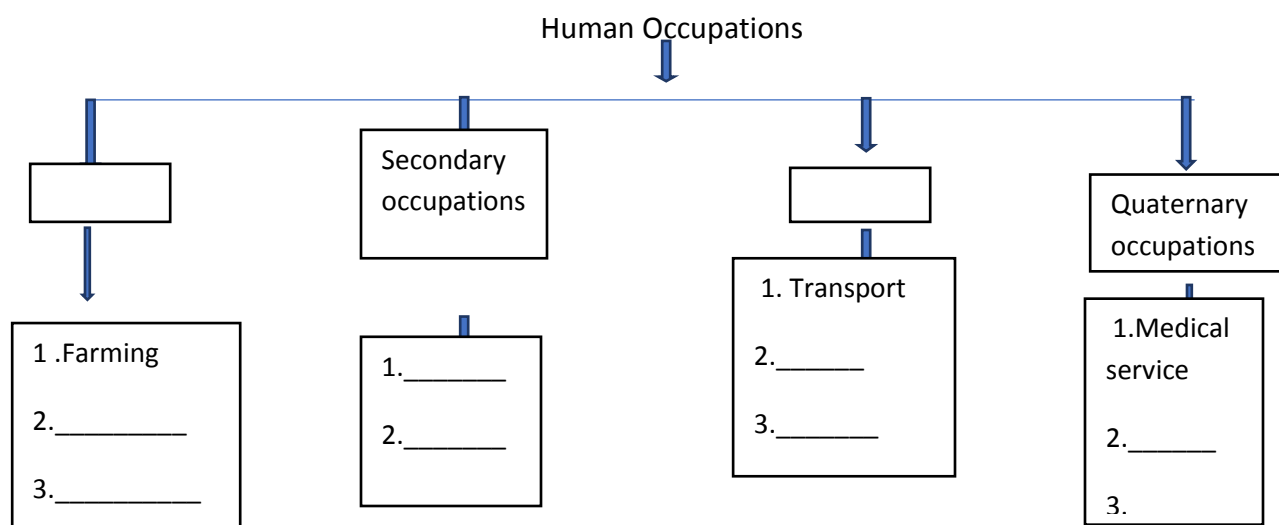
**Q8.) Find the difference between (any 2)**

**( 4 )**

1. Metamorphic rocks and Sedimentary rocks.
2. Hydel power and Power from geo-thermal source.
3. Metamorphic rocks and igneous rocks.

**Q9.) Complete the following table:**

**( 4 )**



**ALL THE BEST!**