

Thakur Educational Trust's (Regd)  
THAKUR VIDYA MANDIR HIGH SCHOOL & JR.COLLEGE  
I Monthly Test Exam. 2016- 2017

Subject: English.

Name: \_\_\_\_\_ STD: VI Div: \_\_\_\_\_ Roll No: \_\_\_\_\_  
Marks: 20 Date: 27 /06/2016 Time:45mins

**Section – I (Reading skills, Vocabulary and Grammar)**

**Q1A. Read the following passage and do the activities :- (5)**

A1. Fill in the blanks:- (1)

- a. Emperor \_\_\_\_\_ is known as one of the greatest rulers in the world.  
b. He had a \_\_\_\_\_ empire.

Emperor Akbar or Akbar the Great is known as one of the greatest rulers in the world not just because he had a vast empire, a very strong army, untold wealth but because he was a good human being. He cared for his subjects.

A2. What did Akbar care for? (1)

A3. Find the word from the passage which means: (½)

- a) very large

A4. Birbal was the closest to the Emperor's heart. Identify the part of speech of the underlined word. (1)

A5. Why was Emperor Akbar known as one of the greatest rulers in the world? (1½)

**Q2A. Read the following passage and do the activities . (5)**

A1. Choose the correct alternatives: (1)

- a. The author was very fond of the -----.  
1) Assam                      2) soldier                      3) Libyan desert  
b. He had run away from -----.  
1) home                      2) desert                      3) prison

As a boy , I was very fond of the old soldier in our little town. He had only one leg, having lost the other somewhere in Assam in 1942. He used to sit on the bank of our small river and tell me that he had run away from home to join the army when he was eighteen. He had experienced his first battle in the Libyan desert in the Second World War. He used to tell me dozens of war stories, but the one I liked best was the one about his escape from a Japanese Prisoner of war camp in Burma.

A2. Where had the soldier lost his leg? (1)

A3. Form Noun Forms :- 1) lost (½)

A4. He experienced his first battle. (Identify the Part of Speech of the underlined words) (1)

A5. Where did the soldier experience his first battle and from where did he escape ? (1½)

**Section – II ( Poem)**

**Q3. Read the following poem and do the activities (3)**

A1. Complete the following lines :- (1)

- a. Oak has known -----.  
b. She has risen again -----.

Though the sturdy Oak has known  
Many a blast that bowed her,  
She has risen again, and grown  
Loftier and prouder

A2. Write the rhyming words. (1)

A3. Name and explain the figure of speech. (1)

She has risen again, and grown

**Section – III ( Grammar)**

**Q4. Do as directed. (2)**

1. Krakatoa is an active volcano. ( Identify the subject and the predicate) (1)

2. Give the verb forms of the following. (1)

- a. calculation                      b. agreement

**Section – IV ( Writing Skills)**

**Q5. Write a letter to your friend thanking him for the Birthday Present you received from him (5)**

**OR**

**Write a letter to your friend telling him about your new place of residence.**

\*\*\*\* ALL THE BEST\*\*\*\*

THAKUR VIDYA MANDIR HIGH SCHOOL & JR.COLLEGE

I Monthly Test . 2016- 2017

Subject: Maths.

Name: \_\_\_\_\_ STD: VI Div: \_\_\_\_\_ Roll No: \_\_\_\_\_

Marks: 20

Date: 30/06/2016

Time: 45mins

**QI) Attempt the following :-**

(1)

a) Define Collinear points with figure.

**QII) Attempt the following :-**

(4)

1) Write the measure of the following angles :-

- a) Straight angle
- 1) Reflex angle
- 2) Complete angle.
- b) Zero angle.

2) Draw an obtuse angle using protractor

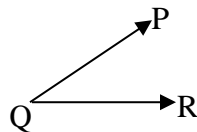
**QIII) Attempt the following :-**

(6)

1) Draw angle LMN =  $55^{\circ}$  and bisect it using compass.

2) From the alongside figure

- a) Name the angle
- b) Write the arms of the angle
- c) Write the vertices of the angle.

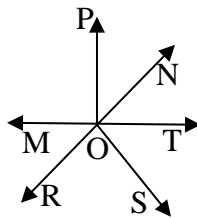


**QIV) Attempt the following :-**

(4)

1. From the alongside figure :-

- a) Name Non-Collinear points.
- b) Name the Lines
- c) Name the rays

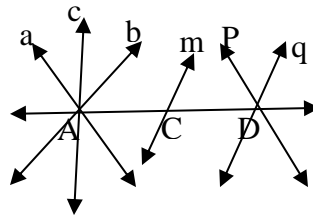


**QV) Attempt the following question.**

(5)

1. Answer the following question :-

- a) Name the Parallel lines,
- b) Concurrent lines,
- c) The points of concurrence in the figure.
- d) Define Parallel lines.
- e) Define Concurrent lines.



ALL THE BEST

*Thakur Educational Trust's (Regd)*

THAKUR VIDYA MANDIR HIGH SCHOOL & JR.COLLEGE

I Monthly Test . 2016- 2017

Subject: Science.

Name: \_\_\_\_\_ STD: VI Div: \_\_\_\_\_ Roll No: \_\_\_\_\_

Marks: 20

Date: 1/07/2016

Time: 45mins

**Section A**

Q1) A. a. Fill in the blanks

(1)

i) Both \_\_\_\_\_ and \_\_\_\_\_ constituents are present in the soil.

b. Multiple choice question choose the correct option and rewrite.

(1)

i) \_\_\_\_\_ is an inert gas.

a) Sulphur dioxide    b) Nitrogen    c) Oxygen    d) Helium.

B. State true or false

(1)

i) Radon is used in decorative light.

Q2) Give Reason (Any one)

(2)

i) Water is life.

ii) Ozone layer is a protective shell of the earth.

Q3) Answer the following (any 1)

(3)

1) What are various constituents of air? Write uses.

2) Explain soil formation with diagram.

Q.4) Attempt the following (any 1)

(2)

1) What will happen if total supply of potable water is finished.

2) What are fossil fuels . Give two examples.

### Section B

Q5)A .a. Fill in the blanks :

(1)

1) The soil on the land is formed by a \_\_\_\_\_ process.

b. Multiple choice question choose the correct option and re-write

(1)

A fresh water available for drinking is \_\_\_\_\_%.

a) 97 b) 2.7 c) 0.3 d) 0.03

B. State true or false

(1)

1) Land and soil are the same thing.

Q6) Give reasons (Any 2)

(2)

1) Humus is an important constituent of soil.

2) Water is an Universal solvent.

Q7) Answer the following (any 1)

(3)

2) Write a note on bedrock.

3) How to control air pollution.

Q.B) Attempt (any 1)

(2)

1) Why there is a shortage of water even though it occupies about 71% of earth surface.

2) What are different layers of soil explain.

### ALL THE BEST

*Thakur Educational Trust's (Regd)*

THAKUR VIDYA MANDIR HIGH SCHOOL & JR.COLLEGE

I Monthly Test Exam. 2016- 2017

Subject: History/Civics.

Name: \_\_\_\_\_ STD: VI Div: \_\_\_\_\_ Roll No: \_\_\_\_\_

Marks: 12

Date: 27/06/2016

Time:25mins

QI) A. Fill in the blanks

(11/2)

1) We learn about the Stone Age period of Indian history through \_\_\_\_\_ excavations.

2) In the beginning, humans used \_\_\_\_\_ and signs to record their thoughts and ideas.

3) The ancient Indians had developed the technique of \_\_\_\_\_ and reciting the Vedas.

B. Match the following

(11/2)

1) Owis

a) inscribed on stone.

2) pottery

b) oral source.

3) donation

c) artefacts.

d) Script.

QII) Answer in one sentence.(any 3)

(3)

1) In the beginning what materials were used for writing?

- 2) Which are the three sources of history?
- 3) Which literature is preserved by oral tradition?
- 4) How do we get information about the diet of the people?

QIII) Give reasons . (any1) (2)

- 1) A written document cannot be said to be authentic.
- 2) In ancient times, people used to roast food grain before grinding them.

QIV) Answer in 40-50 words .(any 1) (2)

- 1) Explain sources of History?
- 2) Write about Bhurjapatra in short.

QV) Answer in 60-80 words (any1) (2)

- 1) How are conclusion drawn while writing history?
- 2) Write in short about written sources.

**ALL THE BEST**

*Thakur Educational Trust's (Regd)*  
**THAKUR VIDYA MANDIR HIGH SCHOOL & JR.COLLEGE**  
 I Monthly Test Exam. 2016- 2017  
 Subject: Geography.

Name: \_\_\_\_\_ STD: VI Div: \_\_\_\_\_ Roll No: \_\_\_\_\_  
 Marks: 8 Date: 28/06/2016 Time:20mins

QI) Fill in the blanks (2)

- 1) Total number of latitudes are \_\_\_\_\_.
- 2) 0° meridian is called \_\_\_\_\_.

QII) Put a tick mark ✓ against the correct option. (2)

- 1) What is the shape of the meridians.  
 a) circular     b) semicircular     c) Points

2) How many parallels are there in the northern hemisphere.

- a) 90     b) 89     c) 91

QIII) Answer the following questions in one or two sentences (2)

- 1) What is the distance between any two parallel.

---



---

2) How will your express the latitude and longitude of the North Pole.

---



---



---

QIV) Answer in brief (2)

- 1) Write down the main uses of graticule.

---



---



---

*Thakur Educational Trust's (Regd)*  
THAKUR VIDYA MANDIR HIGH SCHOOL & JR.COLLEGE  
I Monthly Test 2016- 2017  
Subject: English.

Name: \_\_\_\_\_ STD: VII Div: \_\_\_\_\_ Roll No: \_\_\_\_\_  
Marks: 20 Date: 27/06/2016 Time:45mins

**QI) A Read the following passage and do the activities (5)**

A1 State whether the following statements are True or False. (1)  
i) The bull is blind in the left eye.  
ii) Chandra was a true owner of the animal.

" Did you all hear what he said - that the bull is blind in the left eye?" Chandra asked the people.  
" yes," the people said in one voice." Do you also agree?" Chandra asked the bull seller. " Yes," hissed the bull seller. " All right !" said Chandra and removed his hands from over Mani's eyes. "Now I'll tell you and show you the truth. this lovely animal is not blind at all. But this man who claims to own the animal, to have reared the animal, did not know this for a fact. I know it because I'm the true owner of the animal."

A2) In which eye was the animal blind? (1)  
A3) Give the noun form of- (1/2)  
i) true-  
A4) Chandra asked the people (Underline the subject) (1)  
A5) You have caught a person who has stolen something, How will you punish the culprit? (1<sup>1/2</sup>)

**QII) Read the passage and do the activities (5)**

A1 Fill in the blank : (1)  
i) Our instructor, \_\_\_\_\_ told us what to do.  
ii) \_\_\_\_\_ is a good form of exercise.

Yesterday, we attended our first swimming lesson. Our instructor, Mr. Carlton, told us what to do. First, he showed us where to change into our swimming trunks and where to keep our belongings. Then his assistant demonstrated to us how to float in the water. the whole of the first lesson was on floating. After the lesson, our instructor informed us when to come for the next lesson. Swimming is a good form of exercise. It is also an advantage to learn how to save a person from drowning when we take up the life-saving course, we will know exactly what to do in time of danger.

A2) Write an advantage of learning swimming. (1)  
A3) Give the plural form of- (i) life - (1/2)  
A4)The whole of the first lesson was on floating.(write the part of speech of the underline word) (1)  
A5) Swimming is an excellent activities which other activity can help in self development. (1<sup>1/2</sup>)

**QIII)A. Read the following poem and do the activities (3)**

A1. Find one exclamation and one question from the poem. (1)

" Pitter patter!" falls the rain  
On the school room windowpane.  
Such a plashing! such a dashing!  
will it e'er be dry again?  
Down the gutter rolls a flood,  
And the crossing's deep in mind;  
And the puddles! oh, the puddles  
Are a sight to stir one's blood!

A2.What sights stir one's blood? (1)  
A3 Write any 2 rhyming words from the given poem. (1)

**QIV) Do as Directed: (2)**

1) She went to one \_\_\_\_\_ of the room and \_\_\_\_\_ sadly.(side, sighed ) (1<sup>1/2</sup>)  
2) He clutched his head in his hands. (underline the nouns) (1/2)

**QV) Letter Writing (5)**

A1. Write a letter to your cousin congratulating him/her for standing first in class.

**OR**

A2. Write a letter to your grandmother inviting her to your house to spend some time with you.

\*\*\*\* ALL THE BEST \*\*\*\*

I Monthly Test . 2016 - 2017

Subject: Maths

Name: \_\_\_\_\_ STD: VII Div: \_\_\_\_\_ Roll No: \_\_\_\_\_

Marks: 20

Date: 30/6 /2016

Time: 45mins

**QI) Solve the following:-**

(1)

1) Define Altitude with the help of figure.

**QII) Solve the following**

(4)

1. Find the squares of :- a) 9.5 b) -0.01

2. Write the base and index of the following numbers:- a)  $(-1)^{20}$  b)  $\left(\frac{3}{11}\right)^9$

**QIII) Solve the following.**

(6)

1. Find the square root of  $\frac{2025}{100}$

2. Draw rough figures to illustrate following statements:

a) In  $\triangle PQR$ , Seg QN is an altitude.

b) In  $\triangle NPK$ , Seg PS is a median

c) IN  $\triangle BCD$ , Seg CM is a median and CE is an altitude.

**QIV) Solve the following.**

(4)

1. Find the square root by the division method.

a) 65536

**QV) Solve the following.**

(5)

1a) Draw any  $\triangle$  STD. Draw the bisectors of its three angles.

b) Draw an acute angled triangle  $\triangle$  RTO. Draw the perpendicular bisectors of its three sides.

**ALL THE BEST**

*Thakur Educational Trust's (Regd)*

THAKUR VIDYA MANDIR HIGH SCHOOL & JR.COLLEGE

I Monthly Test 2016- 2017

Subject: Science.

Name: \_\_\_\_\_ STD: VII Div: \_\_\_\_\_ Roll No: \_\_\_\_\_

Marks: 20

Date: 1/07/2016

Time: 45mns

**SECTION A**

**QI) A a) Fill in the blanks:**

(1)

i) Due to the system of \_\_\_\_\_ irrigation, Israel's farms and orchards have become famous worldwide.

b) State True or False and correct the false statement .

(1)

i) We should not allow rain water to percolate into the earth.

**B) Multiple choice question .**

(1)

i) \_\_\_\_\_ is observed as Akshayya Urja Din

a) 20<sup>th</sup> September b) 22<sup>nd</sup> March c) 20<sup>th</sup> August d) 22<sup>nd</sup> August

**QII) Attempt the following (any 1)**

(2)

i) Why has formation of ice become more difficult?

ii) What is soilless agriculture?

**QIII) Attempt the following (any 1)**

(3)

i) What are reasons for soil pollution?

ii) What are the advantage of managing wet garbage?

QIV) Attempt the following? (Any 1) (2)

i) What are the measures for protecting soil?

ii) Why are mineral deposits dwindling?

### SECTION B

QV) A) a. Fill in the blanks: (1)

i) Water is a \_\_\_\_\_ source.

b) State True or False and correct the false statement. (1)

i) Soil becomes fertile due to excessive watering.

B) Multiple choice Question. (1)

i) We must use fuels like \_\_\_\_\_ to reduce air pollution?

a) Petrol b) Diesel c) CNG d) None of the above.

QVI) Attempt the following (any 1) (2)

i) What is your opinion about the factors which are responsible for air pollution?

ii) Why do leaves of trees along roads with traffic look dirty?

QVII) Attempt the following (any 1) (3)

i) What is biotechnology?

ii) Write short note on 'nulla bunding'.

QVIII) Attempt the following (any 1) (2)

i) Why the diversity in plants is reducing day by day?

ii) Which crops have greater demand in the market?

### ALL THE BEST

*Thakur Educational Trust's (Regd)*

THAKUR VIDYA MANDIR HIGH SCHOOL & JR. COLLEGE

I Monthly Test . 2016- 2017

Subject: History/Civics.

Name: \_\_\_\_\_ STD: VII Div: \_\_\_\_\_ Roll No: \_\_\_\_\_

Marks: 12

Date: 27/06/2016

Time: 25mins

QI) A. Fill in the blanks (1)

1) The Central power declined after the death of \_\_\_\_\_.

2) Huge palaces in \_\_\_\_\_ in Syria and at Baghdad in Iraq are instances of magnificent architecture.

B. Match the following (1)

1) King Dahir

a) Tried to organise conflicting Arab tribes

2) Prophet Muhammad

b) Invaded Sindh in the eighth Century A.D.

c) Ruler of Sindh Region

QII) Answer in 25-30 words (any 1) (1)

1) Who were exploited by the feudal lords?

2) What did the Arabs take from China to Europe?

QIII) Give reasons in 25-30 words (any 1) (1)

1) Feudalism emerged in Europe.

2) Merchant class emerged in Europe during the medieval period .

QIV) Answer in 40-50 words (any 1) (2)

1) Write about the Serfs.

2) What were the teachings of Islam?

QV) Answer in 60-80 words (any 1) (2)

- 1) State the obligations of a feudal lord.
- 2) Write about the contribution of the Arabs in brief.

### CIVICS

QVI) Fill in the blanks (1)

- 1) The \_\_\_\_\_ guarantees the rights of citizens.
- 2) The Constituent Assembly adopted the Constitution on \_\_\_\_\_.

QVII) Answer in one sentence each (any 1) (1)

- 1) Name any 2 Women members of the Constituent Assembly.
- 2) Which values have been accepted by the Constitution of India?

QVIII) State True/False with reasons (any 1) (1)

- 1) There were 260 members in the Constituent Assembly.
- 2) Dr. Babasaheb Ambedkar was the President of the Constituent Assembly.

QIX) Answer in 25-30 words (any 1) (1)

- 1) How was the Constituent Assembly formed?
- 2) Write about the working of Constituent Assembly.

*Thakur Educational Trust's (Regd)*

THAKUR VIDYA MANDIR HIGH SCHOOL & JR.COLLEGE

I Monthly Test . 2016- 2017

Subject: Geography.

Name: \_\_\_\_\_ STD: VII Div: \_\_\_\_\_ Roll No: \_\_\_\_\_

Marks: 8 Date: 28/6/2016 Time:20mins.

QI) Fill in the blanks (2)

- 1) Light year is a unit of \_\_\_\_\_
- 2) Light travels \_\_\_\_\_ km in one second.
- 3) The distance between the earth and the sun is 8.3 light \_\_\_\_\_
- 4) The sun is at a distance of about \_\_\_\_\_ km from the earth.

QII) Answer the following in one sentence: (2)

- 1) What is the general shape of a galaxy like?

\_\_\_\_\_

\_\_\_\_\_

2) What is the space?

\_\_\_\_\_

\_\_\_\_\_

QIII) Write short Notes :- (2)

- 1) Galaxy?

\_\_\_\_\_

\_\_\_\_\_

\_\_\_\_\_

QIV) Answer in brief :- (2)

- 1) What does the universe comprise.

\_\_\_\_\_



*Thakur Educational Trust's (Regd)*  
THAKUR VIDYA MANDIR HIGH SCHOOL & JR.COLLEGE  
I Monthly Test 2016- 2017  
Subject: English.

Name: \_\_\_\_\_ STD: VIII Div: \_\_\_\_\_ Roll No: \_\_\_\_\_  
Marks: 20 Date: 27/06/2016 Time:45mins

**Section – I (Reading skills, Vocabulary and Grammar)**

**Q1) A. Read the following passage and do the activities: (5)**

A1. Say whether the following statements are True or False. (1)

- i) The king went to every corner of the city.
- ii) The people were hiding the faults of their king from him.

But none of the people around him had anything to say about his faults.

They were all praise for him.

The king thought," Perhaps these people are afraid of me. That is why they hesitate to talk about his shortcomings. Perhaps they do not want to hurt me. I should ask people outside the palace. They will speak more frankly.

A2. What did the king want to know about from his people? (1)

A3. Write from the Passage the word which means- 'freely'. (½)

A4. They were all praise for him. ( Name the part of speech of the underlined word) (1)

A5. What do you feel about your short comings? (1½)

**Q2) A. Read the following passage and do the activities: (5)**

A1.Complete the following: (1)

Hillary was .....

- i) a.....
- ii) the first.....

Sir Edmund Hillary of New Zealand, a mountaineer, who died in 2008 at the age of 88, was the first to conquer Mount Everest. Sir Edmund had immense energy and strength and also plenty of experience in the Himalayas. So British expedition leader John Hunt asked him to attempt climbing Everest. Sherpa Tenzing was chosen as his climbing partner.

A2.Why did John Hunt ask Edmund to attempt climbing Everest? (1)

A3. Choose the correct option: (½)

- i) immense means.
- a) great      b) confused

A4. Sir Edmund had immense energy and strength and also plenty of experience in the Himalayas. (Pick out the Conjunctions) (1)

A5. What are your feelings about the achievements of Sir Edmund Hillary? (1½)

**SECTION –II (POEM)**

**Q3) A. Read the extract and do the following activities: (3)**

A1. Match the following: (1)

A	B
i) Savage men	a) Repay good deed
ii) Iron Rule	b) Repay evil
	c) followed by uncivilized

What is the Iron Rule?  
The Rule of Savage men:  
If evil is done unto again,  
Evil do thou again.  
This is the Iron Rule.

- A2. What is the Iron Rule? (1)
- A3. Name and explain the Figure of Speech. (1)
- 'Evil do thou again'

-1-

### Section III- (RAPID READING)

- Q4A. Read the following passage and do the activities:** (2)
- A1. The two reasons for people avoiding Dr. Raman- (1)
- i) -----
- ii) -----

People come to him when the patient was on his last legs. Dr. Raman often burst out, "Why couldn't you have come a day earlier?" The reason was obvious- visiting fee twenty-five rupees, and more than that, people liked to shirk the fact that the time had come to call in Dr. Raman; for them there was something ominous in the very association.

- A2) When would people usually go to doctor Raman? (1)

### Section IV – (WRITING SKILLS)

- Q5. Letter Writing: Attempt any one of the following.** (5)
1. Write a letter to your Cousin informing her about the pet you have recently brought.
- or**
2. Write a letter to the Editor of 'The Times of India', requesting her to publish the miserable condition of the stray dogs in your area.

\*\*\*\*BEST OF LUCK\*\*\*\*

<i>Thakur Educational Trust's (Regd)</i>		
THAKUR VIDYA MANDIR HIGH SCHOOL & JR.COLLEGE		
I Monthly Test . 2016- 2017		
Subject: Maths		
Name: _____	STD: VIII	Div: _____ Roll No: _____
Marks: 20	Date: 30/06/2016	Time: 45mins

**QI) Attempt the following:-** (1)

1) Define Irrational number.

**QII) Attempt the following :-** (4)

1. Write in words.
- a.  $\sqrt{324}$       b.  $\sqrt{625}$

2. 1) Classify the following numbers as rational and irrational numbers.

$4.\overline{912}$     $\sqrt{49}$  , 0.1010010001.....,   0.31045693..... $\sqrt{25}$   $\sqrt{10}$

**QIII) Solve the following :-** (6)

- 1) Find the length of diagonal of a square with side 16cm.
- 2) Find the square root by division method. 49.5616

**QIV) Attempt the following :-** (4)

1. Find the length of the diagonal of a rectangle of length 12cm and breadth 7cm.

**QV) Attempt the following :-** (5)

1) Find the square roots to the fourth decimal place by division method. Then write the approximate value up to third, second and first decimal places.

57914

ALL THE BEST

<i>Thakur Educational Trust's (Regd)</i> THAKUR VIDYA MANDIR HIGH SCHOOL & JR.COLLEGE I Monthly Test . 2016- 2017 Subject: Maths		
Name: _____	STD: VIII	Div: _____ Roll No: _____
Marks: 20	Date: 30/06/2016	Time: 45mins

QI) Attempt the following:- (1)

1) Write the square roots of the following number. 576

QII) Attempt the following :- (4)

1. Write in words.

a.  $\sqrt{324}$     b.  $\sqrt{625}$

2. Find the square root by the division method. 2025

QIII) Solve the following :- (6)

1) Classify the following numbers as rational and irrational numbers.

$4.\overline{912}$   $\sqrt{49}$ , 0.1010010001....., 0.31045693..... $\sqrt{25}$   $\sqrt{10}$

2) Find the square root by division method. 49.5616

QIV) Attempt the following :- (4)

1. Find the length of the diagonal of a rectangle of length 12cm and breadth 7cm.

QV) Attempt the following :- (5)

1) Find the square roots to the fourth decimal place by division method. Then write the approximate value up to third, second and first decimal places.

5328

ALL THE BEST

<i>Thakur Educational Trust's (Regd)</i> THAKUR VIDYA MANDIR HIGH SCHOOL & JR.COLLEGE I Monthly Test . 2016- 2017 Subject: Science.		
Name: _____	STD: VIII	Div: _____ Roll No: _____
Marks: 20	Date: 1/7/2016	Time: 45mins

SECTION A

QI) A a) Fill in the blanks: (1)

i) Some fishes use their tailfin as a \_\_\_\_\_ to defend themselves.

b) State true or False (1)

1) Thousands of species of only plants can be seen to exist on the surface of earth. (1)

c) Multiple choice Question (1)

1) \_\_\_\_\_ helps in conserving biodiversity.

a) Biology    b) Biotechnology    c) Botany

QII) Answer the following (any 1) (2)

i) What kind of variety is seen in living things that belong to the same class?

ii) What is preserved in gene banks?

QIII) Attempt the following (any 1) (3)

i) What is the importance of biodiversity?

ii) Why is it important to preserve prey and predator chains?

QIV) Attempt the following (any 1) (2)

1) What is the use of tail fin for the fish?

2) Why are local varieties of cattle threatened?

## SECTION B

- QV) A) a. Fill in the blanks: (1)  
i) Some fishes have short life span while some have \_\_\_\_\_ life span.
- QV)B) State true or False: (1)  
i) Animals living in deserts and those in coastal areas are same in their characteristics.
- QV) C) Multiple choice question (1)  
1) Various efforts are being made to conserve \_\_\_\_\_ species.  
a) Extinct b) Rare c) Endangered
- QVI) Attempt the following (any 1) (2)  
i) Why are large scale changes occurring in natural habitats??  
ii) In which year, the earth summit was held at Rio-de-Janerio in Brazil?
- QVII) Attempt the following (any1) (3)  
i) Why single crop method can prove harmful?  
ii) Write a short note on Reserved Biodiversity Zone?
- QVIII) Attempt the following (any 1) (2)  
i) What is meant by biodiversity?  
ii) Write a short note on Biotechnology.

## ALL THE BEST

*Thakur Educational Trust's (Regd)*

THAKUR VIDYA MANDIR HIGH SCHOOL & JR.COLLEGE

I Monthly Test . 2016- 2017

Subject: History/Civics.

Name: \_\_\_\_\_ STD: VIII Div: \_\_\_\_\_ Roll No: \_\_\_\_\_

Marks: 12 Date: 27/06/2016 Time:25 mins

- QI) A. Fill in the blanks (1)  
1) Leonardo -da- Vinci, an artist, personified \_\_\_\_\_ .  
2) The Portuguese sailor \_\_\_\_\_ discovered the sea-route to India in 1498.
- B. Match the following (1)  
1) Bartholomeu Dias a) Earth Circumnavigation  
2) Ferdinand Magellan b) Cape of Good hope  
c) America.
- QII) Answer in 25-30 words (any 1) (1)  
1) Name the continents in which colonies were established.  
2) State the most important value put forth by the Renaissance.
- QIII) Give reasons in 25-30words (any1) (1)  
1) Why are the followers of Martin Luther called as the 'Protestants'.  
2) Why is Renaissance regarded as the dawn of new science.
- QIV) Answer in 40-50 words (any 1) (2)  
1) Explain the meaning of 'Reformation'  
2) Explain the Term 'Colonialism'.
- QV) Answer in 60-80 words (any1) (2)  
1) Write about the Voyage of Ferdinand Magellan.  
2) State the nature of 'Renaissance'.

## CIVICS

- QVI) Fill in the blanks (1)  
1) India is \_\_\_\_\_ nation.  
2) No country in the world is totally \_\_\_\_\_ in every respect.
- QVII) Answer in one sentence each (any 1) (1)  
1) What kind of relations are there among the nations?  
2) Which qualities among the citizens increase the strength of a nation?
- QVIII) State True/False with reasons (any 1) (1)

- 1) The Term ' National Interest' means selfish interest.
- 2) High population results in increased dependence.

QIX) Answer in 25-30 words (any 1) (1)  
 1) Explain the term 'sovereign nations'  
 2) What is 'national interest'?

**ALL THE BEST**

*Thakur Educational Trust's (Regd)*

**THAKUR VIDYA MANDIR HIGH SCHOOL & JR.COLLEGE**

I Monthly Test. 2016- 2017

Subject: Geography.

Name: \_\_\_\_\_ STD: VIII Div: \_\_\_\_\_ Roll No: \_\_\_\_\_

Marks: 8 Date: 28/6/2016 Time:20mins.

QI) A. Fill in the blanks (2)

- 1) A \_\_\_\_\_ is used for launching an object in space.
- 2) In 1969, India launched its first rocket from \_\_\_\_\_.
- 3) The \_\_\_\_\_ space launching station on the eastern coast of India was established in the year 1971.
- 4) In 2008, India made a record of simultaneously launching \_\_\_\_\_ satellites into space.

B. Answer the following in short (2)

- 1) Name the three famous Indian astronauts.

\_\_\_\_\_

- 2) In which year was Chandrayaan launched by India?

\_\_\_\_\_

QII) A. Write short note on:- (2)

- 1) Remote sensing.

\_\_\_\_\_

\_\_\_\_\_

\_\_\_\_\_

\_\_\_\_\_

\_\_\_\_\_

\_\_\_\_\_

- 2) Rocket.

\_\_\_\_\_

\_\_\_\_\_

\_\_\_\_\_

\_\_\_\_\_

B. Answer in brief :- (2)

- 1) Describe the uses of space technology.

\_\_\_\_\_

\_\_\_\_\_

\_\_\_\_\_

\_\_\_\_\_

\*\*\*\* ALL THE BEST\*\*\*\*

**Thakur Educational Trust's (Regd)**  
**THAKUR VIDYA MANDIR HIGH SCHOOL & JR. COLLEGE**  
**ISO : 9001-2008 CERTIFIED**  
**प्रथम-मासिक-परीक्षा 2016-17**

कक्षा -अष्टमी

दिनांकः-28 /07/2016

गुणा : - 20

विषयः- संस्कृतम्

अवधिः - होरा

नाम - \_\_\_\_\_

विभागः \_\_\_\_\_

कमांकः \_\_\_\_\_

प्रथमः विभागः - गद्यम्

प्रश्न 1) संवादांशं पठित्वा निर्दिष्टाः कृतीः कुरुत ।

आचार्यः : -एषः सागरः । एषः अपि छात्रः । सः महाविद्यालये पठति । पुण्यपत्तने एव वसति सः ।  
एषः मम सहायकः ।  
सागरः :- प्रमोद का तव प्रिया कला  
प्रमोदः : संगीतकला मम प्रिया कला ।  
कोकिला : मम प्रिया कला पाककला ।  
आचार्यः : शोभनम् । शोभनम् । प्रसादः कः तव अभिमतः क्रीडाप्रकारः  
प्रसादः : हॉकी इति क्रीडाप्रकारे मम रुचिः ।  
अक्षयः : आचार्य गिर्यारोहणं महयम् अतीव रोचते ।  
आचार्यः : युष्माकम् अभिमताः कलाः भिन्नाः । क्रीडाप्रकाराः विविधाः । तथापि अत्र आगमनस्य सर्वेषां हेतुः एकः एव । बालकाः धनं राष्ट्रस्य इति अस्माकं शिविरस्य बोधवाक्यं ।  
अतः नूतनानाम् अनुभवानां कृते वयम् अत्र सम्मिलिताः ।

अ1. अवबोधनम् । (केऽपि 2 कृतीः कुरुत ।)

2

i) पूर्णवाक्येन उत्तरं लिखत । (Answer in Sanskrit.)

का प्रमोदस्य प्रिया कला?

ii) वाक्यं पुनर्लिखित् वा सत्यं वा असत्यमिति लिखत । (True or False )

प्रसादस्य अभिमतः क्रीडाप्रकारः गिर्यारोहणम् अस्ति ।

iii) कः कं वदति । (Who said to whom)

मम प्रिया कला पाककला ।

iv) उचितं पर्यायं चित्वा वाक्यं पुनर्लिखत ।

\* शिविरस्य बोधवाक्यं अस्ति..... ।

( 'बालकाः धनं देशस्य' , 'बालकाः धनं राष्ट्रस्य')

\* सागरः .....वसति ।

( नाशिकनगरे , पुण्यपत्तने)

अ2 शब्दज्ञानम् । (काः अपि 3 कृतीः कुरुत ।)

3

i) गद्यांशे आगते द्वे षष्ठी विभक्त्यन्तपदम् ..... ।

ii) समूहेतरं पदं चिनुत । (Odd man out)

1. नामधेयम् , नाम , सहायकः

2. भिन्नाः , अभिमताः , विविधाः

iii) सन्धिविग्रहं कुरुत । (Dissolve Sandhi)

तथापि = ..... + ..... ।

iv) विलोमशब्दौ लिखत । (Write Antonyms )

नूतनः × ..... ।

पुरतः × ..... ।

अ3. स्वमत-अभिव्यक्तिः । (Personal response )

2

क्रीडायाः महत्त्वं इति विषये 30 40 शब्दैः माध्यमभाषया लिखत ।

द्वितीयः विभागः - पद्यम्

प्रश्न 2.अ अधोदत्तं सुभाषितं पूर्णं शुद्धं लिखत ।

2

i) सुवर्णं .....श्रेष्ठमुच्यते ।

ब. माध्यमभाषया एकस्य श्लोकस्य तात्पर्यं लिखत ।

2

1. प्राप्ते तु षोडशे वर्षे पुत्रे मित्रवदाचरेत् ।  
यथा पुत्रे तथा पुत्र्यां स्नुषायामपि नान्यथा । ।
2. अर्थेन भेषजं लभ्यं न हयारोग्यं कदापि च ।  
अर्थेन ग्रन्थसम्भारः ज्ञानं लभ्यं प्रयत्नतः । ।

तृतीयः विभागः - लेखन कौशल्यम्

प्रश्न 3.निबन्धलेखनम् ।

5

3 पर्यायेषु 1 विषयम् अधिकृत्य 5 वाक्यात्मकं निबन्धं लिखत ।

1. नदी
2. सूर्यः
3. मम माता

चतुर्थः विभागः - व्याकरणम्

प्रश्न 4. अ.नाम + सर्वनाम्नारूपैः आवलिपूरणम् ।

2

विभक्तिः	एकवचनम्	द्विवचनम्	बहुवचनम्
सप्तमी	.....	मालयोः	.....
चतुर्थी	तस्मै	.....	तेभ्यः
षष्ठी	वनस्य	वनयोः	.....

पञ्चमः विभागः - अपठितम्

प्रश्न 5.संस्कृत पद्यांशं पठित्वा  
only One)

2

माध्यमभाषया अनुवादं कुरुत । (Write

1. कर्मायत्तं फलं पुंसां बुद्धिः कर्मानुसारिणी ।  
तथापि सुधिया भाव्यं सुविचार्यैव कुर्वता । ।
2. चेतो भग्नं यदि किल भवेत्सज्जनानाम् कदाचित्  
निःसन्देहं सहजमचिराद्धेवमवद्युज्यते तत् ।  
छिन्नो भिन्नो घटति न यथा कुम्भकारस्य कुम्भः  
दुर्वृत्तानामुपहतमनो युज्यते नैव नैव । ।
3. दक्षः श्रियमधिगच्छति पथ्याशी कल्यातां सुखमरोगी ।  
अभ्यासी विद्वान्तं धर्मार्थं यशांसि च विनीतः । ।

*Thakur Educational Trust's (Regd)*  
THAKUR VIDYA MANDIR HIGH SCHOOL & JR.COLLEGE  
I Monthly Test 2016- 2017  
Subject: English.

Name: \_\_\_\_\_ STD: IX Div: \_\_\_\_\_ Roll No: \_\_\_\_  
Marks: 30 Date: 27/06/2016 Time:45mins

**Section – I (Reading skills, Vocabulary and Grammar)**

**Q I. A. Read the following passage and do the activities:- (7)**

A1. Find out words from the extract that describe the following: (1)

- a) rose - b) head -

One beautiful spring day, a red rose blossomed in a forest. Many kind of trees and plants grew there. As the rose looked around a pine tree nearby said, " What a beautiful flower. "I wish I was that lovely."

Another tree said, "Dear Pine, do not be sad, we can't have everything". The rose turned its head and remarked." It seems that I am the most beautiful plant in this forest". A sunflower raised its yellow head and asked, "In this forest there are many beautiful plants. You are just one of them."

The red rose replied, " I see everyone admiring me." Then the rose looked at a cactus and said."Look at the ugly plant full of thorns!" The pine tree said, "Red rose, what kind of talk is this? You have thorns, too."

A2.i) . Where did the rose blossom? (1)

ii) . Why was the cactus not liked by the rose plant? (1)

A3. Pick the words from the passage which mean the following:- (1)

- i) to bloom ii) appreciating

A4. You have thorns too. (Make it Negative) (1)

A5. Do you appreciate the attitude of the rose plant? Justify your answer (2)

**Q II A. Read the following passage and do the activities. (7)**

A1. Answer in one word. (1)

i) How many oceans is the sea-world divided?

ii) Which is the largest ocean?

The sea-world is divided into three main oceans-the Pacific, the Atlantic and the Indians- and two smaller oceans- the Arctic or Northern Ocean and the Antarctic or Southern Ocean. The Pacific is by the largest of these, for it covers half the sea-area of the world. In addition to the oceans there are other areas of sea, such as the Red Sea, the Mediterranean Sea, the Caribbean Sea and the Black Sea.

The continents are entirely surrounded by what is called the 'Continental shelf' that slopes very gradually to a depth of about 500feet. This shelf is built up of sediment that has been brought down to the sea by the continental rivers. Where the land near the coast is low. and flat, the continental shelf may extend thirty, forty or even more miles from the coast; where mountains ranges run parallel to the sea and near to it(as on the coast of Africa) the shelf is narrowed to only a mile or two.

A2. i). How much area of the sea-world does the Pacific occupy? (1)

ii). How is the Continental shelf built? (1)

A3. Write the verb forms of: i) addition ii) depth (1)

A4. The continents are surrounded by the Continental shelf. (Change the voice) (1)

A5. What kind of a text is this according to you? Why? (2)

**SECTION – B ( POEM)**

**QIII A Read the following passage carefully and answer the questions given below: (3)**

A1. Choose the correct meaning of the following from the given options. (1)

i) played out.

1) spent the afternoon together. ii) it happens. iii) lost a game.

ii) turn up.

1) return from the field after a defeat. ii) happens especially by chance. iii) make final preparations.

This is your first game, my child. I hope you win  
I hope you win for your sake, not mine.  
Because winning's nice,  
It's good feeling.  
Like the whole world is yours.  
But it passes, this feeling,  
And what lasts is what you've learned.



And what you learn about is life,  
 That's what sports is all about.  
 The whole thing is played out in an afternoon.  
 The happiness of life.  
 The miseries.  
 The joys.  
 The heartbreaks.

- A2. What message does the poet want to give? (1)  
 A3 Name and Explain the Figures of Speech: (1)  
 The whole world is yours.

**QIII. Read the following extract carefully and do the activities:- (3)**

- A1. State True or False :- (1)  
 i) The man offered a high price for the house.  
 ii) The house was built by Nasruddin's father.

Nasruddin's neighbour was a crooked man with a large, bushy moustache and he knew about his financial difficulties. He thought he could take advantage of the situation. "I want to help you, good neighbour. I will buy the house from you, Even though I don't really have any interest in it." The man offered a pitiful price.

Mullah Nasruddin looked delighted and drew a small piece of paper from the folds of his clothing. "God bless you with long life and healthy progeny for this generous gesture! The house shall be yours, as soon as we take care of this little clause in the contract."

"What clause?" asked the neighbour, suspiciously?

"Only a very small thing. This house was built by my father."

"A fine gentleman he was. Always paid in cash."

"And you see here on the wall of the living room- there is one nail sticking out. My father never had the chance to finish hammering it in. He had a heart attack and died."

- Q.2. What sort of man was Nasruddin's neighbour? (1)  
 Q.3. Do you feel sympathy for the neighbour? Why? (1)

**SECTION IV (WRITING SKILLS)**

- Q5. Reading newspaper is a very good habit. You do it regularly and you have observed your younger sister doesn't do so. Write a letter to her, advising her to read newspapers regularly. (5)

**OR**

You have witnessed loud noise coming out from a nearby Music Academy. This causes a lot of disturbance to the residents of your locality. Write a letter to the Police department Complaining about the same.

- Q6. Write a dialogue between a teacher and a student on a Open House day discussing about the performance of the student. (5)

**OR**

Write a dialogue between two students discussing about their choice of career..

**\*\*\*\*ALL THE BEST\*\*\*\***

*Thakur Educational Trust's (Regd)*

THAKUR VIDYA MANDIR HIGH SCHOOL & JR.COLLEGE

I Monthly Test 2016- 2017

Subject: General Maths I

Name: \_\_\_\_\_ STD: IX Div: \_\_\_\_\_ Roll No: \_\_\_\_\_

Marks: 20 Date: 30/06/2016 Time: 45mins.

- QI) Solve the following (1)**

1) Simplify  $\frac{(49)^2}{(7)^4}$

- QII) Solve the following (4)**

1) Evaluate :  $\left(\frac{2}{5}\right)^3 \times \left(\frac{2}{5}\right)^5 \div \left(\frac{2}{5}\right)^7$

2) Evaluate :  $-\sqrt{225}$

**QIII) Solve the following**

(6)

1) Find the square root by factorization method

$$3\frac{141}{196}$$

2) Evaluate :  $(-0.5)^3$

**IV) Solve the following**

(4)

1) Find the cube root by factorization method.

$$-0.001$$

**V) Solve the following**

(5)

1) Find the square root of the following numbers by division method up to two decimals.  
line AB and CD intersect at O.

**ALL THE BEST**

*Thakur Educational Trust's (Regd)*

THAKUR VIDYA MANDIR HIGH SCHOOL & JR.COLLEGE

I Monthly Test 2016- 2017

Subject: Geometry

Name: \_\_\_\_\_ STD: IX Div: \_\_\_\_\_ Roll No: \_\_\_\_\_

Marks: 20

Date: 2/7/2016

Time: 45mins

**QI) Attempt the following**

(1)

1. The Co-ordinates of points A and B are -3 and -4 respectively. Find  $d(A, B)$ .

**QII) Attempt the following**

(4)

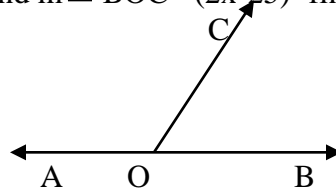
1. When  $A-B-C$ ,  $\angle(AB) = 12^\circ$ ,  $\angle(BC) = 7.5^\circ$  then Draw the figure and find  $\angle(AB) = ?$

2. Find the measure of supplementary angle of  $\frac{3}{5}$ th of right angle

**QIII) Attempt the following**

(6)

1. In the adjoining figure,  $m\angle AOC = (3x + 5)^\circ$  and  $m\angle BOC = (2x - 25)^\circ$  find the measures of  $\angle AOC$  and  $\angle BOC$ .



2. Take 4 points P, Q, R, S in a plane. Draw lines by joining different pairs of points. How many lines can you draw in the following cases?

i) No three of them are collinear.

ii) Three of these points are collinear.

**IV) Attempt the following**

(4)

1. State and prove Converse of Interior angle test.

**V) Attempt the following**

(5)

1. Prove that "If a pair of alternate angles formed by a transversal of two coplanar lines is congruent then the lines are parallel".

*Thakur Educational Trust's (Regd)*

THAKUR VIDYA MANDIR HIGH SCHOOL & JR.COLLEGE

I Monthly Test . 2016- 2017

Subject: Science.

Name: \_\_\_\_\_ STD: IX Div: \_\_\_\_\_ Roll No: \_\_\_\_\_

Marks: 30

Date: 1/07 /2016

Time: 1hr

**SECTION A**

QI)A. Fill in the blanks (1)

1) The maximum capacity of M shell is \_\_\_\_\_ electron. (1)

2) State whether 'True' or 'False'. Correct the false statement. (1)

(i) An electron has same mass as that of Proton.

B. Choose the correct alternative & write the answer. (1)

1. \_\_\_\_\_ have same atomic number but different atomic mass number.

(a) Isotopes (b) Isobar (c) Allotropes (d) Normal Atom

QII) Attempt the following (any 2) (4)

1) Define atomic mass number. Write an example ?

2) What is a Dalton? What is the value of One Dalton?

3) What do you mean by Isobars ? Write an example.

QIII) Attempt the following (any 2) (6)

1) Give scientific reason- An atom as a whole is electrically neutral though it contains charged particles.

2) Write short Note on Isotopes

3) Draw neat and labelled diagram of Rutherford's Scattering Experiment.

QIV) Attempt the following (any 1) (2)

1) Two electrons in Helium are placed in only one shell while three electrons in Lithium occupy two shells. Why?

2) Write electronic configuration for the following elements.

a) Argon (18) b) Potassium (19) (Table format is must).

### SECTION B

QI) A Fill in the blanks. (1)

1) Mercuric Oxide  $\xrightarrow{\text{Heating}}$  \_\_\_\_\_ + \_\_\_\_\_

2) Identify the odd one out. State the reason. (1)

i) Lemon juice, carbon, Brass, Milk

B. Choose the correct alternative & write the answer. (1)

1. \_\_\_\_\_ mixture has smallest size of particles.

(a) Solution (b) Colloid (c) Suspension (d) Emulsion.

QII) Attempt the following (any 2) (4)

1) Define element and give 2 examples with their symbols.

2) What do you mean by Tyndall effect? State an example.

3) What are the constituents of stainless steel? What elements give silvery look to stainless steel?

QIII) Attempt the following (any 2) (6)

1) Give Scientific reason- Water is a compound.

2) Table salt is made from sodium & chlorine which are poisonous. Still we eat table salt without getting poisoned. Explain Why?

3) Distinguish between Compound and Mixture?

QIV) Attempt the following (any 1) (2)

1) Write the molecular formula for Benzene and Calcium Hydroxide. State the number of atoms for each element.

2) What do you mean by Heterogeneous mixture?

### ALL THE BEST

*Thakur Educational Trust's (Regd)*

THAKUR VIDYA MANDIR HIGH SCHOOL & JR. COLLEGE

I Monthly Test 2016- 2017

Subject: History/Political Science.

Name: \_\_\_\_\_ STD: IX Div: \_\_\_\_\_ Roll No: \_\_\_\_\_

Marks: 20 Date: 27/06/2016

Time: 40mins

QI) A. Fill in the blanks (1.5)

1) \_\_\_\_\_ preached 'Bhujan Hitaya, Bhujan Sukhaya'.

2) Man is the only \_\_\_\_\_ who can develop Agriculture.

3) The \_\_\_\_\_ had patriarchal family.

B. Match the following (1.5)

1) Celebacy a) Jainism

- 2) Tri-Ratna  
3) Eight fold path
- b) Vedas  
c) Shraman  
d) Buddhism

QII) Answer in 25-30 words (any 1) (2)

- 1) Write about the extent of the Harappan civilization.  
2) Write about the main occupations of the Aryans.

QIII) Give reasons in 25-30 words (any 1) (2)

- 1) Buddha preached his religion in the Pali language.  
2) The pre-historic age is also known as the stone-age

QIV) Answer in 40-50 words (any 1) (3)

- 1) Write about the work of Mahaveer.  
2) Write about the religions belief of Harappans.

QV) Answer the following in 60-80 words.(any 1) (4)

- 1) Write about the "Eight Fold Path" preached by Buddha.  
2) Give an account of the vedic literature.

### POLITICAL SCIENCE

QVI) Fill in the blanks (1)

- 1) Politics helps to resolve the \_\_\_\_\_.  
2) According to \_\_\_\_\_, "Man is a political animal".

QVII) Answer in one sentence each (any 1) (1)

- 1) Why do groups emerge?  
2) What is politics?

QVIII) State True/False with reasons (any 1) (2)

- 1) Political Science is a science.  
2) Behaviour of the leaders/rulers can be examined with the help of political science.

QIX) Answer in 25-30 words (any 1) (2)

- 1) Why do we study political science?  
2) What is the subject matter of Political Science?

\*\*\*\* ALL THE BEST\*\*\*\*

*Thakur Educational Trust's (Regd)*

THAKUR VIDYA MANDIR HIGH SCHOOL & JR.COLLEGE

I Monthly Test. 2016- 2017

Subject: Geography & Economics.

Name: \_\_\_\_\_ STD: IX Div: \_\_\_\_\_ Roll No: \_\_\_\_\_

Marks: 20

Date: 28/6 /2016

Time: 45mins

QI) A. Fill in the blanks:- (2)

- 1) Aluminium is obtained from the \_\_\_\_\_ mineral.  
2) Black soil is formed due to weathering of \_\_\_\_\_ rocks.

B. Match the following:- (2)

- 1) Mangrove a) Fertile soil  
2) Alluvial soil b) Tendu, Bel  
c) Kandal, Tiwar

QII) A. Answer in short. (4)

- 1) State the main reasons of soil erosion.  
2) What are the main types of coal?

B) Give Reason.(any 1) (2)

- 1) Forest area is limited in Central Maharashtra.  
2) Canal irrigation is mostly found in western Maharashtra.

QIII A). Write short note on :- (any 1)

(2)

- 1) Uses of aluminium.
- 2) Importance of forests.

B). Answer in detail.

(8)

1. What are the different sources of water? Explain the irrigation system in Maharashtra?
2. What do you know about scarcity of water? What are the effects of drought in Maharashtra?

\*\*\*\* ALL THE BEST\*\*\*\*

**Thakur Educational Trust's (Regd)**  
**THAKUR VIDYA MANDIR HIGH SCHOOL & JR. COLLEGE**  
**ISO : 9001-2008 CERTIFIED**  
**प्रथम-मासिक-परीक्षा 2016-17**

कक्षा -नवमी

दिनाङ्कः- 28 /06/2016

गुणाः - 30

विषयः- संस्कृतम्

अवधिः - 1 होरा

नाम - \_\_\_\_\_

विभागः \_\_\_\_\_

क्रमसंख्या \_\_\_\_\_

प्रथमः विभागः - गद्यम्

इत्थं महर्षिः शोकः श्लोकत्वमागतः । इयं शापवाणी नाम वेदादनन्तरं पृथिवीतले जातः अनुष्टुप्छन्दसः प्रथमाविष्कारः । तेन स्वयं महर्षिः वाल्मीकिरपि विस्मितः । आश्रमं प्रत्यागतः स साक्षाद् ब्रह्मदेवेनादिष्टः, “ऋषे रचय रामायणम् ।” तथा तस्मै वरोऽपि दत्तः ।

यावत्स्थास्यन्ति गिरयः सरितश्च महीतले ।

तावद्रामायणकथा लोकेषु प्रचरिष्यति । ।

ततः महर्षिः वाल्मीकिः ब्रह्मदेवस्य आदेशमनुसृत्य मर्यादापुरुषोत्तमस्य प्रभुरामचन्द्रस्य जीवनचरित्रं नाम रामायणं महाकाव्यमरचयत् । तदस्माकं राष्ट्रीयं महाकाव्यम् आदिकाव्यं च वर्तते । तस्य रचयिता महर्षिः वाल्मीकिरादिकविः च । रामायणस्य पठनं न केवलं भारतीयानां कृते अपि तु देशान्तरवासिनां कृतेऽपि आनन्ददायि । अहो दिव्या प्रतिभा रससिद्धकवीश्वरस्य ।

प्रश्न 1. गद्यांशं पठित्वा निर्दिष्टाः कृतीः कुरुत ।

अ.1. अवबोधनम् । ( केऽपि 2 कृतीः कुरुत )

2

i. पूर्णवाक्येन उत्तरं लिखत ।

वेदादनन्तरं पृथिवीतले कस्य छन्दसः आविष्कारः जातः ?

ii. वाक्यं पुनर्लिखित्वा सत्यं वा असत्यमिति लिखत ।

वाल्मीकिरामायणं अस्माकं राष्ट्रीयं महाकाव्यम् ।

iii. उचितं पर्यायं चित्वा वाक्यं पुनर्लिखत ।

ब्रह्मदेवस्य ..... अनुसृत्य महर्षिः वाल्मीकिः रामायणमरचयत् ।

( आदेशाय , आदेशम् , आदेशात् )

अ.2. शब्दज्ञानम् । ( काः अपि 3 कृतीः कुरुत )

3

i. रिक्तस्थानपूर्तिं कुरुत ।

a. वाल्मीकिरपि = .....+..... । ( वाल्मीकि+रपि , वाल्मीकि+अपि , वाल्मीकिः+अपि )

b. प्रत्यागतः = .....+..... । ( प्रति+आगतः , प्रत्या+गतः , प्रत्य+आगतः )

ii. समूहेतरं पदं चिनुत ।

a. खगः , पक्षी , वृक्षः ।

b. पृथिवी , नदी , मही

iii. गद्यांशं पठित्वा विशेषणपदं लिखत ।

a. .... रामायणम् ।

b. .... वाल्मीकिः ।

iv. गद्यांशे आगते सप्तम्यन्तपदे a. .... । b. .... ।

अ.3. स्वमतप्रकटनम् । अभिव्यक्तिः

2

i. “ रामायणं नाम किम् ? ” इत्यस्मिन् विषये 30/40 शब्दपरिमितां

माध्यमभाषया लिखत ।

द्वितीयः विभागः - पद्यम्

प्रश्न 2.अ. पद्यांशं पठित्वा निर्दिष्टाः कृतीः कुरुत ।

करवदरसदृशमखिलं भुवनतलं यत्प्रसादात् कवयः ।

पश्यन्ति सूक्ष्मतयः सा जयति सरस्वती देवी । । 1 । ।

उपकर्तुं प्रियं कर्तुं कर्तुं स्नेहमकृत्रिमम् ।

सज्जनानां स्वभावोऽयं केनेन्दुः शीतलीकृतः । । 2 । ।

अ.1. माध्यमभाषया 30/40 शब्दपरिमितं एकस्य श्लोकस्य तात्पर्यं लिखत ।

2

*Thakur Educational Trust's (Regd)*  
**THAKUR VIDYA MANDIR HIGH SCHOOL & JR. COLLEGE**  
 I Monthly Test. 2016- 2017  
 Subject: ICT.

Name: \_\_\_\_\_ STD: IX Div: \_\_\_\_\_ Roll No: \_\_\_\_\_  
 Marks: 20 Date: 02/07/2016 Time: 45mins

QI) Fill in the blanks:- (2)

- 1) \_\_\_\_\_, conversations and images are various forms of information.
- 2) A \_\_\_\_\_ simulator is used for training aircraft pilots.

QII) State whether the following statements are true or false :- (2)

- 1) ICT offers equitable and affordable tools for education.
- 2) ICT can be used only for formal education in education institutes.

QIII) Re-write the following statements by selecting the correct option: (2)

1) ICT promotes a learning environment that is \_\_\_\_\_

- a) Competitive
- b) Unethical.
- c) Collaborative
- d) isolated.

2) Computer simulations in medical training uses \_\_\_\_\_.

- a) Robots
- b) Virtual reality
- c) Interactive radio
- d) animals.

QIV) Rewrite the following statements by selecting two correct options :- (2)

1) Forms of information include \_\_\_\_\_, \_\_\_\_\_

- a) data
- b) email
- c) CD-ROM
- d) images.

QV) Answer the following questions (8)

- 1) Explain the term ICT.
- 2) State the four objectives that ICT aims to achieve in the field of education.
- 3) Name any four devices used for gathering and sharing information.
- 4) Name any two communication technologies.

QVI) Answer in brief:- (4)

- 1) Explain the use of ICT in business and industry.

**ALL THE BEST**

Thakur Educational Trust's (Regd)  
**THAKUR VIDYA MANDIR HIGH SCHOOL & JR. COLLEGE**  
 I MONTHLY TEST 2016-2017

Subject: English

Name \_\_\_\_\_ STD: X Div \_\_\_\_\_ Roll No: \_\_\_\_\_  
 Marks : 30 Date : 27 / 06 / 2016 Time: 1 Hr.

**Section – I (Reading skills, Vocabulary and Grammar)**

**QI) Read the following passage and do the activities: (07)**

A1. Match the column: (1)

A	B
i. revolt	a. turns
ii. twists	b. fauna
	c. mutiny

Further on, in the flashback Irfan and his friends ride one adventure after another, at times along with the British police commissioner of Mumbai. The story keeps taking twists and turns as Irfan's fortunes wax and wane in the backdrop of 1857 War of Independence. Then circumstances change in such a way that Irfan is forced to

leave Mumbai and that is where the second book “Koleshwar’s Secret” comes into picture. In Koleshwar’s Secret the drama unfolds in the Sahyadris in its full glory with vivid descriptions of Irfan’s adventure in the quest to protect a treasure. Typical fauna of the Sahyadris like gaur, tiger, leopard, barking deer, hornbill and snakes add to the thrill and mystery quotient of the story. On the misty cloud- shrouded wild slopes of the Sahyadris the story moves back to the present day from the dream sequence and the reader is riveted to the adventure, which ends with the unravelling of Koleshwar’s Secret.

- A 2) Fill in the blanks with the suitable words from the passage: (1)
- Two animals that one encounters in the Sahyadris are the -----and the -----.
  - Koleshwar’s Secret setup is in the background of the misty cloud- shrouded wild ----- of the Sahyadris.
- A 3) i. Find the words from the passage which means : (1)
- explain something that is mysterious
  - increase and decrease at times
- A 4) i. The story moves back to the present.( Add a Question Tag) (1)
- Further on, in the flashback Irfan and his friends ride one adventure after another. ( Name the Parts of Speech of the underlined words.) (1)
- A 5) What unfolds in Koleshwar’s Secret and how? (2)

**Q2 A Read the following passage and do the activities: (07)**

- A1. State whether the following statements are True or False (1)
- Elephants live in families just like humans.
  - Humans construct various things which make elephants confined to one part of the Jungle.

Elephants are among the most gentle and shy of all animals in the Indian jungle. They live in families the same way we humans do, with mother looking after the young ones till they have grown up and can feed and protect themselves. Elephants walk very long distances for food because they are programmed never to overuse their limited resources. But when we build canals, dams, railway lines and other such things in their migratory paths, they become confined to one part of the jungle and are forced to ruin their own jungle to feed their massive appetites. Elephants also need lots of water. This can be a great problem if they live in place where humans steal their only resources of water supply by diverting it to fields and cities.

- A2. What are elephants programmed with? (1)
- A3. i). Identify in which sentence **water** is used as a Noun and Verb: (1)
- Please water the garden.
  - We should not waste water.
- ii). Fill in the blanks with suitable adjectives by referring to the passage. (1)
- appetite.
  - distance
- B4.i). Elephants walk very long distances for food because they are programmed never to overuse their limited resources. (Frame ‘Wh’ question so as to get the underlined part as answer) (1)
- ii). Elephants walk very long distance. [State the Subject and Predicate] (1)
- B5) How can humans protect elephants? (2)

-1-

**Section – II ( Poem)**

**Q3. Read the following extract of the poem and do the activities (03)**

- A1. Complete the following lines: (1)

- There fly multiplies clouds -----.
- Environmental pollution is ----- .

There lie abundant rivers with pollution  
 There fly multiplies clouds with contamination  
 And when good food goes to waste  
 The valleys of the earth bury their paste

Our world is an institution  
 Of environmental pollution  
 We choose not to care  
 For our future generations

And I for one am guilty  
 For buying the hundreds of electric gadgets



That attracts the industries to produce like maggots  
Environmental pollution is at the heart of our planet

- A2. What is the tone of the poem? (1)  
A3. Name and explain the Figure of Speech. (1)  
For buying the hundreds of electric gadgets.

( SECTION III :RAPID READING)

**Q4A. Read the Following passage and complete the activities given below: (3)**

- A1 Choose the correct alternatives and fill in the blanks : (1)
- i) The patient clutched the doctor's ----- with his weak fingers.  
a) hand b) fingers c) wrist
- ii) The patient didn't want to leave his ----- unsettled.  
a) wife and children b) property c) good fortune
- "Oh!" the doctor exclaimed. "You are exerting yourself too much. You must be quieter." He felt idiotic to be repeating it. "How fine it would be," he reflected, "to drop the whole business and run away somewhere without answering anybody any question!" The patient clutched the doctor's wrist with his weak fingers and said, "Ramu, it is my good fortune that you are here at this moment. I can trust your word. I can't leave my property unsettled. That will mean endless misery for my wife and children. You know all about Subbiah and his gang. Let me sign before it is too late. Tell me....."
- A2. Answer in one word: (1)
- i). Who was Subbiah?  
ii). Who felt idiotic?
- A3. Who was Ramu? Who was the patient worried about? (1)

**Section IV: (Writing Skill)**

Q5 A. Attempt any one of the following letters with the help of given news headline: (5)

BAD CONDITION OF ROADS  
DURING RAINS LEADS TO MISHAPS

A1. Letter

OR

A1. Letter

Write to your friend about the condition of roads and the care to be taken.

Write a letter to the newspaper editor highlighting the condition of the roads in your area and suggest suitable measures

**Q 6. Report / Fact File: (5)**

A1. 19<sup>th</sup> June 2016 was celebrated as 'Father's Day' all over the world to mark the importance of their role in bringing up their children. Write a newspaper report on the same stressing the importance of Fathers in our life.

OR

A2. Read the following information and prepare a Fact File for Bhimashankar Wildlife Sanctuary:  
- in the Sahyadris; 7 hours drive from Mumbai (260 km); buses from Bhiwandi, Kalyan, Wada (Highway No. 3); dense forests, towering trees, perennial creepers, variety of fauna (giant squirrels, leopards, Malabar Grey Hornbills, Falcons); best to visit in summer, ample hotels, dhabas; nature spot; reserved forest area.

**ALL THE BEST**

*Thakur Educational Trust's (Regd)*

THAKUR VIDYA MANDIR HIGH SCHOOL & JR.COLLEGE

I Monthly Test Exam. 2015- 2016

Subject: Maths Alegebra

Name: \_\_\_\_\_ STD: X Div: \_\_\_\_\_ Roll No: \_\_\_\_\_

Marks: 20

Date: 9/07/2015

Time: 45mns

QI) QI) Attempt the following (1)

1) Write the given equation in a standard form

i)  $(x + 4)(x + 1) = 0$

ii)  $m(2m + 1) = 0$

QII) Attempt the following (4)

1) Check whether the given values of the variables are the roots of the given quadratic equation.

- i)  $y^2 - y - 6 = 0$ ,  $y = 1, 3, -2$   
 ii) find the value of  $b^2 - 4ac$  of given equation.  
 $3x - 3x + 1 = 0$

QIII) Attempt the following (6)

1) Solve the following quadratic equation by completing Square method.

i)  $4x^2 - 8x + 1 = 0$

2) Solve the given equation by formula method

i)  $3x^2 + 5x + 3 = 0$

QIV) Attempt the following (4)

1) Solve the given quadratic equation by formula method.

2)  $2m^2 - 3m + 2 = 0$

QV) Attempt the following (5)

1) In a Mango grove each vertical line has 4 more trees than the horizontal row. If the total number of trees in the grove is 480. Then find the number of trees in each horizontal row.

*Thakur Educational Trust's (Regd)*  
 THAKUR VIDYA MANDIR HIGH SCHOOL & JR.COLLEGE  
 II Monthly Test 2016- 2017  
 Subject: Geometry

Name: \_\_\_\_\_ STD: X Div: \_\_\_\_\_ Roll No: \_\_\_\_\_  
 Marks: 20 Date: 2/7/2016 Time: 45mins

QI) Attempt the following (1)

1) The terminal arm is in IV quadrant, what are the measure of possible angles?

QII) Solve the following (4)

1) An arc of a circle of radius 7 cm subtends an angle of  $36^\circ$  at the centre. Find the length of the arc.

2) The ratio of areas of two triangles with the common base is 6:5. Height of smaller triangle is 9cm then find the corresponding height of larger triangle.

QIII) Solve the following (6)

- 1) Eliminate  $\Theta$  if  
 $x = a \operatorname{cosec} \Theta + b \cot \Theta$   
 $y = a \operatorname{cosec} \Theta - b \cot \Theta$

2) Draw a circle having radius 3 cm. Draw a chord  $XY = 5\text{cm}$ . Draw tangents at point X & Y without using centre.

QIV) Solve the following (4)

1) The angle of elevation of a cloud as seen from a point 400 mts above a lake is  $30^\circ$  and the angle of depression of its reflection in the lake is  $45^\circ$ . Find the height of the cloud above the lake.

QV) Attempt the following (5)

1) A cylinder of radius 12cm contains water up to the height of 20cm. A spherical iron ball is dropped into the cylinder and thus water level is raised by 6.7cm. What is the radius of the ball.

\*\*\*\*ALL THE BEST\*\*\*\*

*Thakur Educational Trust's (Regd)*  
 THAKUR VIDYA MANDIR HIGH SCHOOL & JR.COLLEGE  
 I Monthly Test . 2016- 2017  
 Subject: Science & Technology.

Name: \_\_\_\_\_ STD: X Div: \_\_\_\_\_ Roll No: \_\_\_\_\_  
 Marks: 30 Date: 01/07/2016 Time: 1hr

SECTION-A

- QI) Name the following:-** (2)
- 1) Two elements having a single electron.
  - 2) Eka- Silicon is also called as.

- QII) Answer the following:-** (4)
- 1) Metallic Character decreases from left to right in a period.
  - 2) The material used for fuse has low melting point.

- QIII) Answer the following :-** (6)
- 1) Give the De-Merits of Mendeleev's Periodic table.
  - 2) State Joules law and derive it.

- QIV) Answer the following:-** (3)
- 1) Derive an expression for the resistors connected in Parallel.

### SECTION-B

- QV) Name the following:-** (2)
- 1) Amount of Energy produced during Aerobic respiration.
  - 2) Instrument used to measure blood pressure.

- QVI) Answer the following :-** (4)
- 1) Translocation is needed in all higher plants.
  - 2) Breathing rate increases during vigorous exercise.

- QVII) Answer the following :-** (6)
- 1) How are fats digested in human body?
  - 2) Explain the structure and function of nephron.

- QVIII) Answer the following:-** (3)
- 1) Explain the digestive system with reference to the following.  
i) Small intestine ii) Mouth iii) Stomach.

### ALL THE BEST

*Thakur Educational Trust's (Regd)*

THAKUR VIDYA MANDIR HIGH SCHOOL & JR.COLLEGE

I Monthly Test 2016- 2017

Subject: History/Political Science.

Name: \_\_\_\_\_ STD: X Div: \_\_\_\_\_ Roll No: \_\_\_\_\_

Marks: 20 Date: 27/06/2016 Time: 40 mins

- QI) A. Fill in the blanks** (1.5)

- 1) Portuguese King \_\_\_\_\_ motivated the navigation.
- 2) Vasco da Gama sought business concessions from king \_\_\_\_\_ of Calicut.
- 3) The African continent was known as \_\_\_\_\_ until the 18th Century.

- QI) B. Match the following** (1.5)

**A**

- 1) Vasco da Gama
- 2) Portuguese
- 3) Barthlomew Dias

**B**

- a) American journalist
- b) New sea route to India
- c) Goa
- d) Portuguese Sailor

- QII) Answer in 25-30 words (any 1)** (2)

- 1) The discovery of interior part of Africa did not take place, why?
- 2) Why was Japan called a recluse nation?

- QIII) Give reasons in 25-30 words (any 1)** (2)

- 1) Africa was known as a dark continent until the 18<sup>th</sup> century.
- 2) China remained undivided.

- QIV) Answer in 30-40 words (any 1)** (3)

- 1) Write any three destructive effects of Imperialism.

2) What is the meaning of colonization?

**QV) Answer in 60-80 words (any 1) (4)**

- 1) Write the reasons for imperialism (any four).
- 2) Write about 'Nanking Treaty'.

### POLITICAL SCIENCE

**QVI) Fill in the blanks (1)**

- 1) In democracy all citizen have \_\_\_\_\_ right to vote.
- 2) Indian has \_\_\_\_\_ form of democracy.

**QVII) Answer in one sentence each (any 1) (1)**

- 1) What is recall?

**QVIII) State True/False with reasons (2)**

- 1) There is Presidential democracy in India.

**QIX) Answer in 25-30 words (2)**

- 1) What is indirect democracy?

\*\*\*\* ALL THE BEST\*\*\*\*

*Thakur Educational Trust's (Regd)*

THAKUR VIDYA MANDIR HIGH SCHOOL & JR. COLLEGE

I Monthly Test . 2016- 2017

Subject: Geography & Economics.

Name: \_\_\_\_\_ STD: X Div: \_\_\_\_\_ Roll No: \_\_\_\_\_

Marks: 20

Date: 28/6/2016

Time: 45mins

**QI) Fill in the blanks:- (2)**

- 1) Area wise \_\_\_\_\_ is the smallest state in India.
- 2) \_\_\_\_\_ is the most continuous loftiest and northernmost range of Himalayas.

**QII) A. Give the Geographical Reason:- (Any 2) (4)**

- 1) North Mountains are homeland to many tribals.
- 2) Regionalization is very essential.
- 3) Most of the Himalayas rivers are perennial in nature.

**B. Write short note on. (Any 2) (4)**

- 1) Characteristics of North Indian Plain.
- 2) Origin of Himalayas.
- 3) Line Graph.

**QIII) Answer in brief -(Any 1) (4)**

- 1) Write in brief about the characteristics of Himalayas.
- 2) What are the characteristics of tourism in Himalayan Region.

### Economics

**QIV) Answer in one or two sentence. (2)**

- 1) What is meant by economy?
- 2) Explain the term capitalist economy.

**QV) Answer in brief: (4)**

- 1) Explain sectoral distribution as a feature of economy.

\*\*\*\* ALL THE BEST\*\*\*\*

**Thakur Educational Trust's (Regd)**  
**THAKUR VIDYA MANDIR HIGH SCHOOL & JR. COLLEGE**  
**ISO : 9001-2008 CERTIFIED**  
**प्रथम-मासिक-परीक्षा 2016-17**

कक्षा -दशमी

दिनाङ्कः- 28/06/2016

गुणा : - 30

विषयः- संस्कृतम्

अवधिः - 1 होरा

नाम -

विभागः \_\_\_\_\_ क्रमसंख्या \_\_\_\_\_

प्रथमः विभागः - गद्यम्

( अध्ययनकाले विद्युत्प्रवाहे खण्डिते एतादृशी चर्चा प्रारब्धा । )

पार्थः हन्त, वसन्तर्तौ परीक्षासमय एव भारनीयमनं वर्तते । ऊर्जाविपत्तिस्तु वर्धते एव प्रतिदिनम् ।

अथर्वः मया पठितम्, ननु ऊर्जा त्वक्षया । तत्कथमूर्जाविपत्तिः ।

श्रेया सत्यम् ऊर्जा त्वक्षया एव । परमूर्जासाधनानि तु मर्यादितान्येव ।

नष्टे कारणे कुतः कार्योत्पत्तिः

अथर्वः परं का नाम ऊर्जा । कानि तस्याः रूपाणि ।

श्रेया ऊर्जा नाम कार्यशक्तिः । उष्मा, प्रकाशः, ध्वनिः, विद्युदादीनि बहूनि तस्याः रूपाणि ।

प्रश्न 1. संवादांशं पठित्वा निर्दिष्टाः कृतीः कुरुत ।

अ.1 अवबोधनम् । ( केऽपि 2 कृती कुरुत )

2

i. पूर्णवाक्येन उत्तरं लिखत ।

का नाम उर्जाविपत्तिः ?

ii. वाक्यं पुनर्लिखित्वा सत्यं वा असत्यमिति लिखत ।

सत्यम्, ऊर्जा तु क्षया एव ।

iii. उचितं कारणं चित्वा वाक्यं पुनर्लिखत ।

ऊर्जाविपत्तिः वर्तते । यतः .....(ऊर्जासाधनानि मर्यादितानि /ऊर्जासाधनानि अमर्यादितानि वर्तन्ते ।)

अ.2. शब्दज्ञानम् । ( काः अपि 3 कृतीः कुरुत )

3

i. रिक्तस्थानपूर्तिं कुरुत ।

a. विद्युदादीनि = .....+..... । ( विद्युदा+आदीनि/विद्युत्+आदीनि/ विद्युत् +दीनि)

b. वसन्तर्तौ = .....+..... । ( वसन्तर्+तौ/वसन्त+तर्तौ/वसन्त +ऋतौ)

ii. समूहेतरं पदं चिनुत ।

a. उन्नतिः विकासः निकासः । b. सूर्यः कविः रविः ।

iii. नाट्यांशे आगते अव्यये । ..... ।..... ।

iv. नाट्यांशे आगते सप्तम्यन्तपदे ..... ।..... ।

ब. स्वमतप्रकटनम् । अभिव्यक्तिः

2

i. “ऊर्जा त्वक्षया तत्कथमूर्जाविपत्तिः ?” इत्यस्मिन् विषये 30/40 शब्दपरिमितां माध्यमभाषया लिखत ।

द्वितीयः विभागः - पद्यम्

प्रश्न 2.अ. पद्यांशं पठित्वा निर्दिष्टाः कृतीः कुरुत ।

आगत्य च स गंगायास्तटाच्चिक्षेप वारिणि ।

उद्धृत्योद्धृत्य सिकताः पश्यतस्तस्य सोर्मिणि । ।1। ।

इत्युक्तः स तपोदत्तः शक्रेण द्विजरूपिणा ।

विचार्य विद्यां तत् प्राप्तुं तपस्यक्त्वा गृहं ययौ । ।2। ।

THAKUR VIDYA MANDIR HIGH SCHOOL & JR.COLLEGE

I Monthly Test . 2016- 2017

Subject: ICT.

Name: \_\_\_\_\_ STD: X Div: \_\_\_\_\_ Roll No: \_\_\_\_\_

Marks: 20

Date: 02/07/2016

Time: 45mins

QI) Fill in the blanks:-

(2)

- 1) Computerisation and the use of abstract models have turned many people into \_\_\_\_\_ consumers .
- 2) Education is of huge importance in the knowledge society as an \_\_\_\_\_ for socio-economic development.

QII) State whether the following statements are true or false:-

(2)

- 1) ICT works on the request-response model.
- 2) Video conference is used for single person at a time.

QIII) Multiple choice questions (Single correct answer) :-

(2)

- 1) ICT stands for \_\_\_\_\_.
  - a) Information and Communication Technology.
  - b) Information and Computer Technology.
  - c) Interaction and Compile Technique.
  - d) Information Creation Technology.
- 2) ICT is a/an \_\_\_\_\_ for major educational and developmental reforms.
  - a) facilitator
  - b) engine.
  - c) resource
  - d) accelerator.

QIV) Multiple Choice questions (Two correct answer) :-

(2)

- 1) \_\_\_\_\_ and \_\_\_\_\_ through ICT are new openings for working people to acquire knowledge and improve their skills.
  - a) Open Universities
  - b) Distance education.
  - c) National Informatics Centre (NIC)
  - d) Physical Campus.

QV) Answer in brief:-

(8)

- 1) Define Information and Communication technology.
- 2) Write any two roles of educators to promote literacy.
- 3) Explain the scope of ICT in education (Any 2 points).
- 4) Define Information Highway.

QVI) Answer the following.

(4)

- 1) Explain the transformative impacts of ICT in education.

ALL THE BEST

